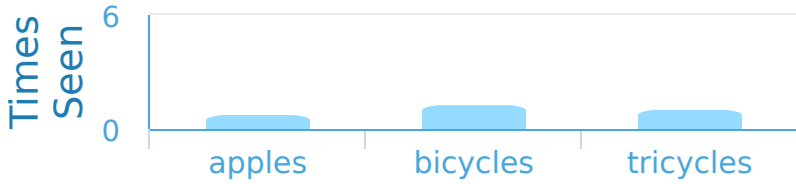


#1

While at the store Kayla made a bar graph of all the things that she'd seen. Which things did Kayla see most?

Objects in the Store



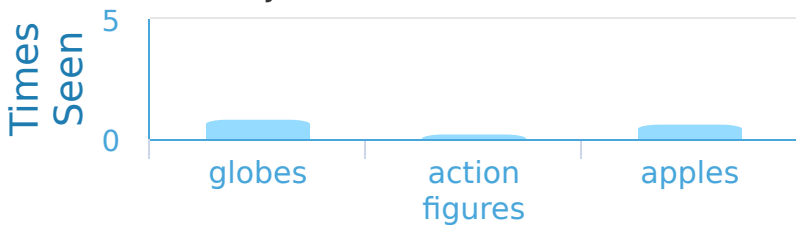



Show your work

#2

While at the store Kayla made a bar graph of all the things that she'd seen. How many more globes than action figures did Kayla see?

Objects in the Store



5 more

1 more

4 more

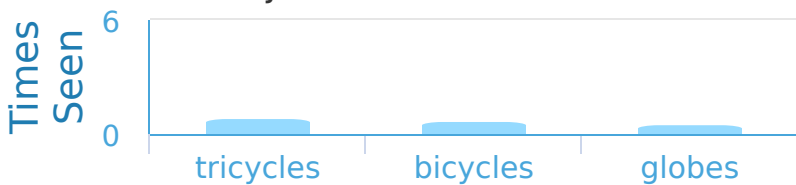
3 more

Show your work

#3

While at the store Kaitlyn made a bar graph of all the things that she'd seen. Which things did Kaitlyn see most?

Objects in the Store

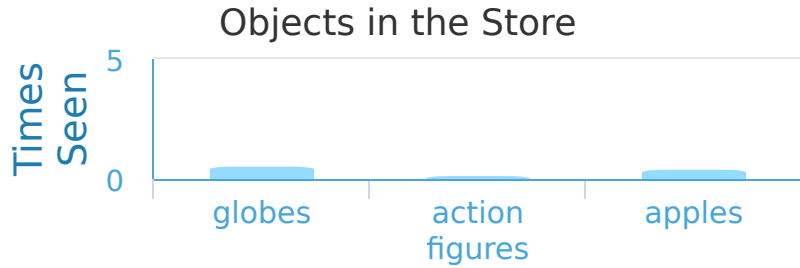





Show your work

#4

While at the store Kayla made a bar graph of all the things that she'd seen. How many more globes than action figures did Kayla see?

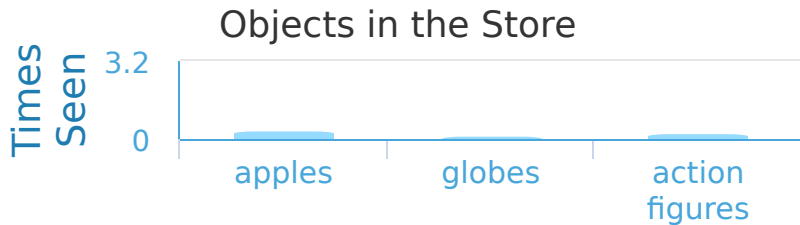


- 5 more
- 1 more
- 4 more
- 3 more

Show your work

#5

While at the store Samantha made a bar graph of all the things that she'd seen. Which things did Samantha see most?

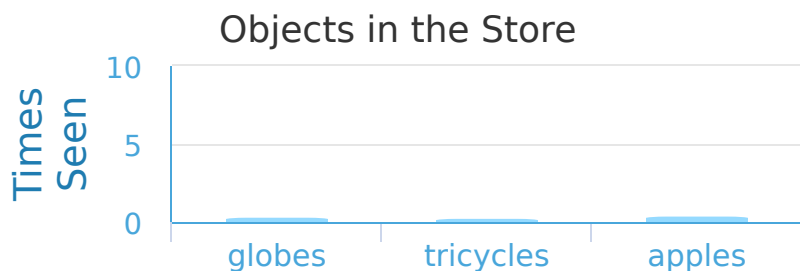





Show your work

#6

While at the store Caleb made a bar graph of all the things that he'd seen. How many more globes than tricycles did Caleb see?



- 4 more
- 1 more
- 3 more
- 2 more

Show your work

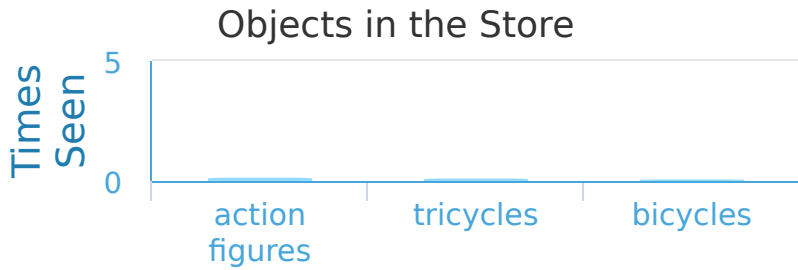
#7 While at the store Ashley made a bar graph of all the things that she'd seen. How many more action figures than globes did Ashley see?



- 4 more
- 5 more
- 1 more
- 2 more

Show your work

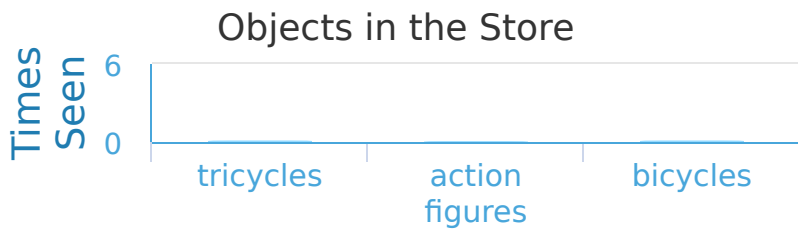
#8 While at the store Daniel made a bar graph of all the things that he'd seen. How many more action figures than tricycles did Daniel see?



- 2 more
- 4 more
- 1 more
- 3 more

Show your work

#9 While at the store Nathan made a bar graph of all the things that he'd seen. Did Nathan see more tricycles or action figures?





Show your work

#10

While at the store Daniel made a bar graph of all the things that he'd seen. How many more action figures than tricycles did Daniel see?



more

Show your work

#11

While at the store Madison made a bar graph of all the things that she'd seen. How many more bicycles than action figures did Madison see?

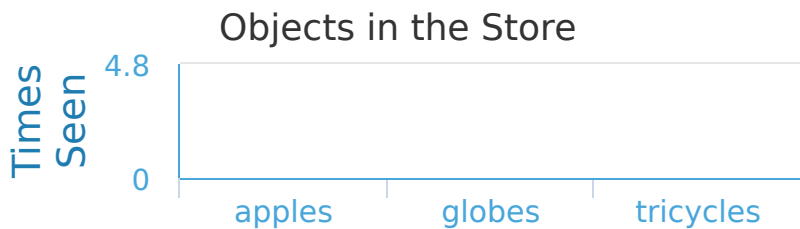


more

Show your work

#12

While at the store Matilda made a bar graph of all the things that she'd seen. Which things did Matilda see most?



Show your work

Question	Answer
#1	choice 1
#2	choice 4
#3	choice 3
#4	choice 4
#5	choice 2
#6	choice 2
#7	choice 4
#8	choice 3
#9	choice 1
#10	1
#11	1
#12	choice 2