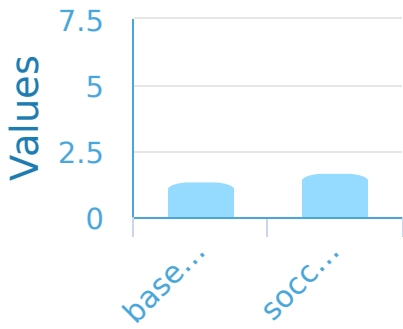
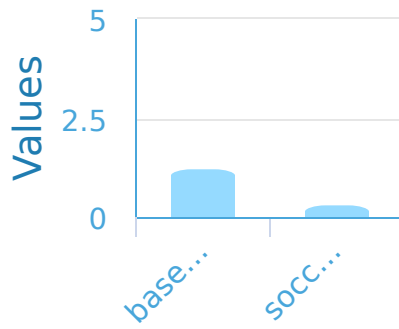


#1

In the school gym Zoe saw 4 baseballs and 1 soccer ball. Which bar graph corresponds to what Zoe saw?

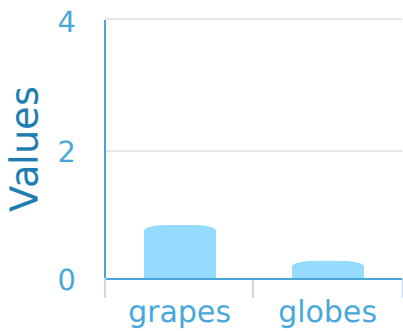


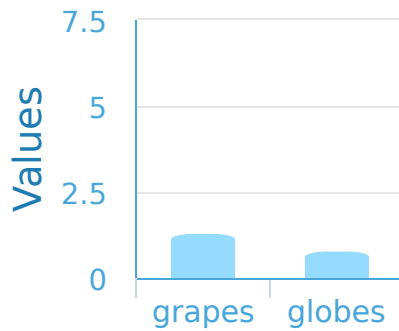


Show your work

#2

Luke loves making graphs. At the sphere store he saw 3 grapes and 1 globe. Which bar graph corresponds to what Luke saw?

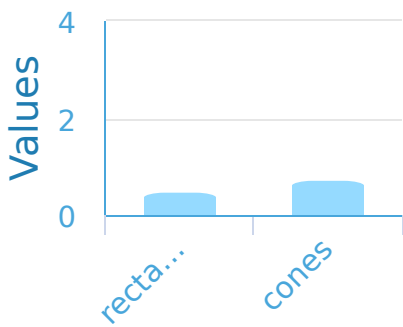


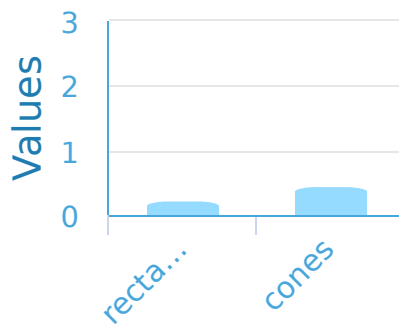


Show your work

#3

In a box of building blocks Ava found 2 rectangular pyramids and 3 cones. Which bar graph corresponds to what Ava saw?



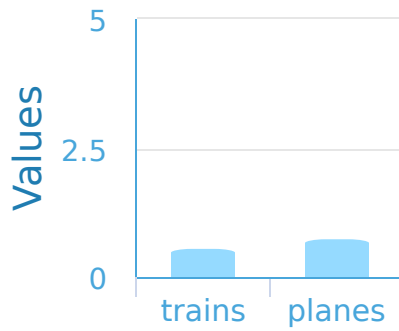
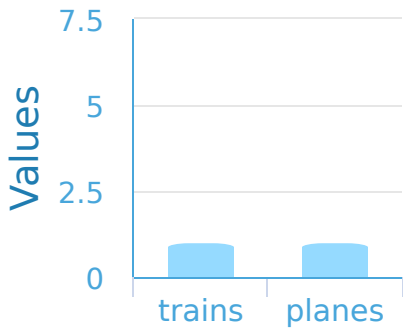


Show your work



#4

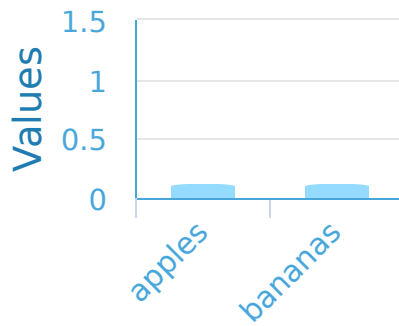
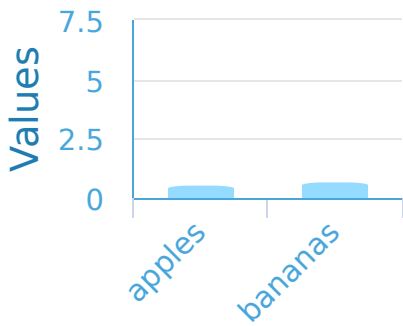
Luke likes toy vehicles and made a chart of the ones he owns. There are 3 trains and 4 planes. Which bar graph corresponds to the toys Luke has?



Show your work

#5

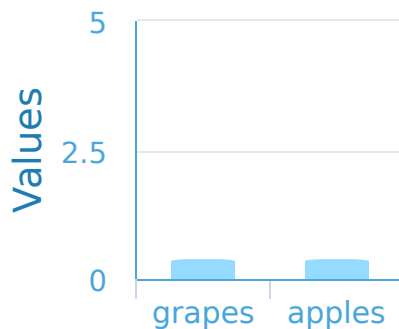
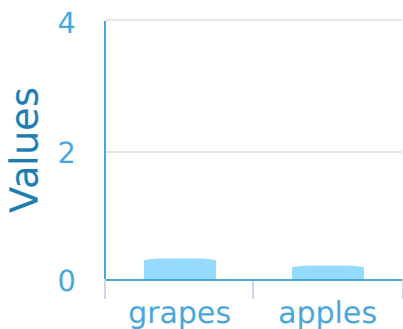
Diana's mom gave her a chart of the fruits she needs to buy. The chart has 4 apples and 5 bananas. Which bar graph corresponds to what Diana needs to buy?



Show your work

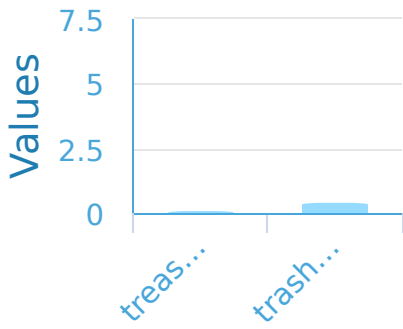
#6

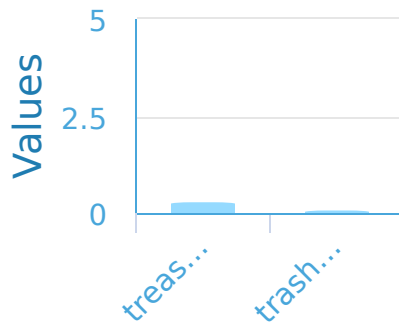
Darren's mom gave him a chart of the fruits he needs to buy. The chart has 4 grapes and 4 apples. Which bar graph corresponds to what Darren needs to buy?



Show your work

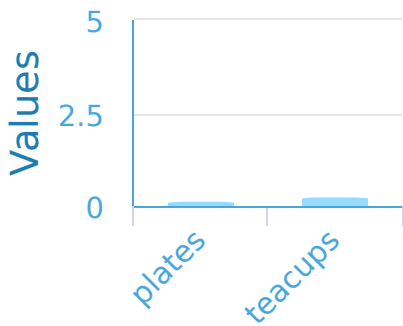
#7 For a pirate school assignment Darren made a chart of the furniture in his room. There is 1 treasure chest and 5 trash cans. Which bar graph corresponds to Darren's furniture?

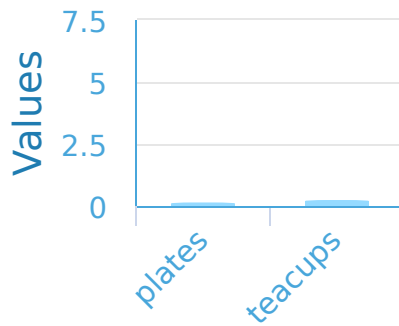




Show your work

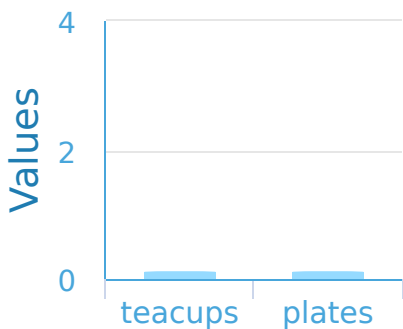
#8 In Mackenzie's kitchen there are 3 plates and 5 teacups. Which bar graph corresponds to the contents of the kitchen?

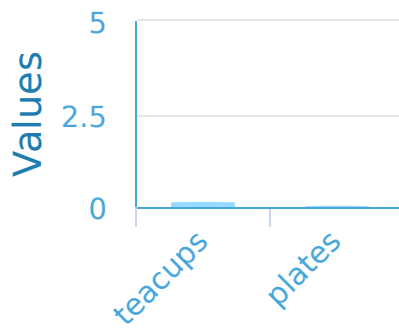




Show your work

#9 In Natalie's kitchen there are 3 teacups and 3 plates. Which bar graph corresponds to the contents of the kitchen?



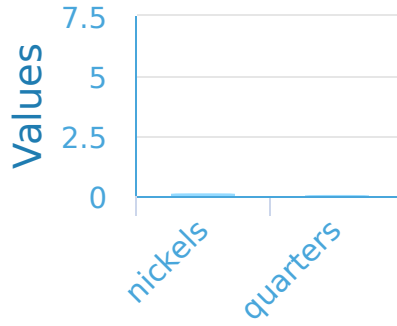
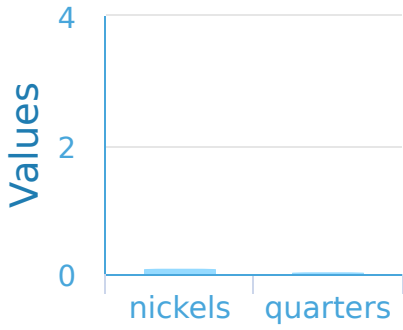


Show your work



#10

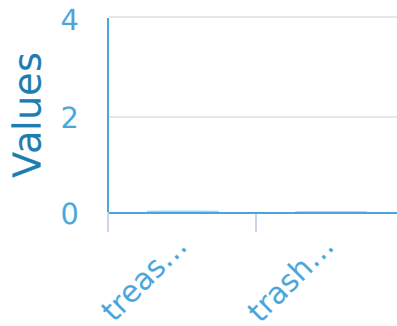
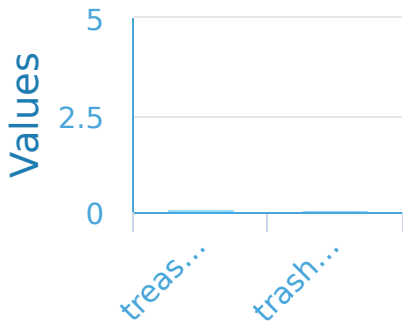
In her pocket Brianna has 5 nickels and 2 quarters. Which bar graph corresponds to the money in Brianna's pocket?



Show your work

#11

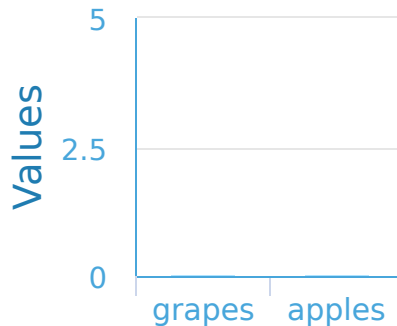
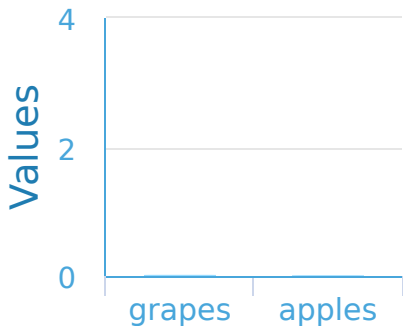
For a pirate school assignment Madison made a chart of the furniture in her room. There are 3 treasure chests and 2 trash cans. Which bar graph corresponds to Madison's furniture?



Show your work

#12

Darren's mom gave him a chart of the fruits he needs to buy. The chart has 4 grapes and 4 apples. Which bar graph corresponds to what Darren needs to buy?



Show your work

Question	Answer
#1	choice 2
#2	choice 1
#3	choice 1
#4	choice 2
#5	choice 1
#6	choice 2
#7	choice 1
#8	choice 2
#9	choice 1
#10	choice 2
#11	choice 2
#12	choice 2