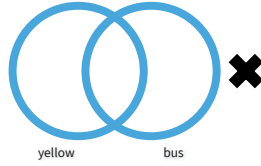
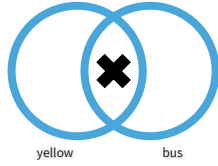
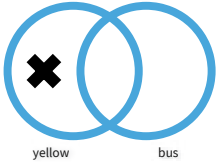


#1

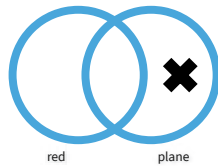
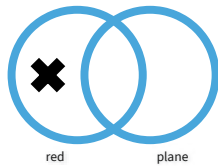
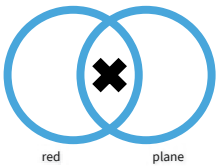
Which diagram represents this object?



Show your work

#2

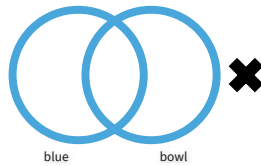
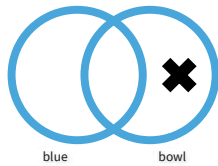
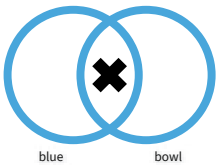

Which diagram represents this object?



Show your work

#3

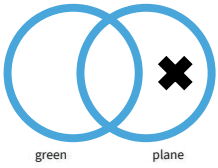
Which diagram represents this object?

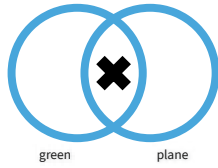


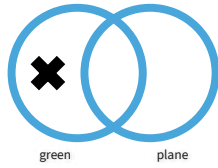
Show your work

#4

Which diagram represents this object?



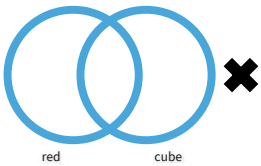


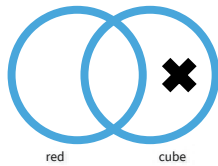


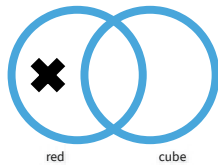
Show your work

#5

Which diagram represents this object?



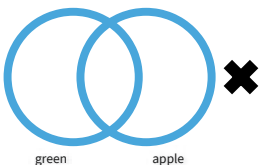


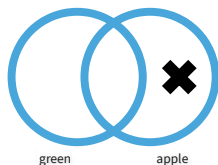


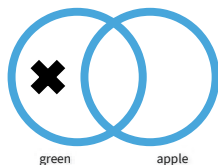
Show your work

#6

Which diagram represents this object?



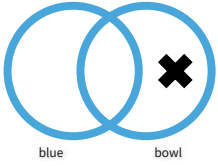



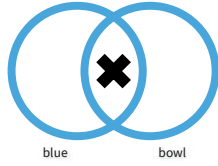


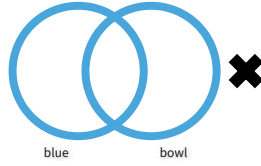
Show your work

#7

Which diagram represents this object?



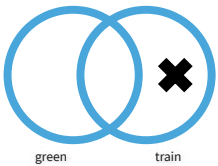


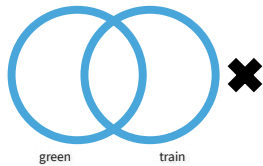


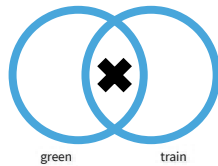
Show your work

#8

Which diagram represents this object?



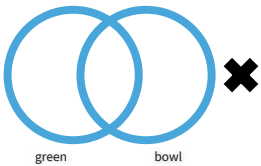


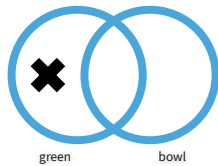


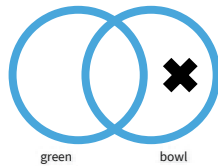
Show your work

#9

Which diagram represents this object?





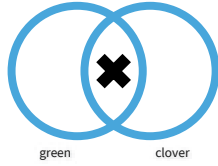
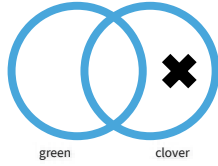
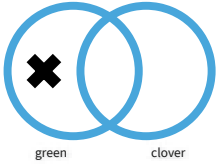


Show your work



#10

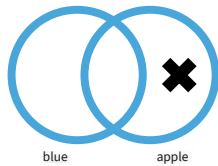
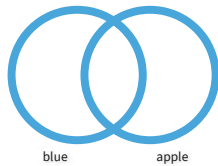
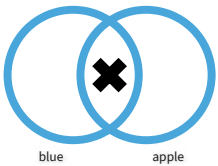
Which diagram represents this object?



Show your work

#11

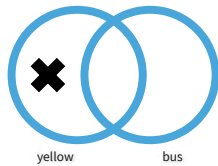
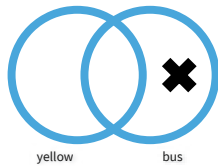
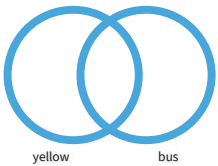
Which diagram represents this object?



Show your work

#12

Which diagram represents this object?



Show your work

Question	Answer
#1	choice 3
#2	choice 3
#3	choice 2
#4	choice 1
#5	choice 2
#6	choice 2
#7	choice 1
#8	choice 1
#9	choice 2
#10	choice 3
#11	choice 3
#12	choice 1