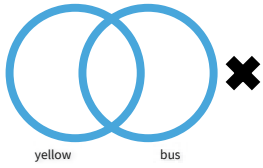
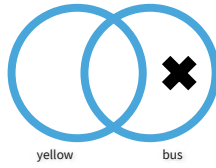
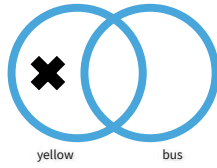


#1

Which diagram represents this object?



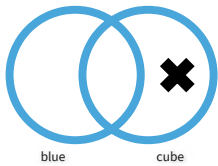



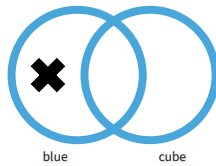


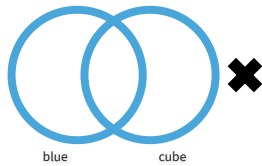
Show your work

#2

Which diagram represents this object?



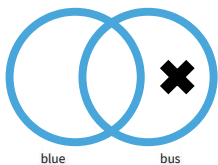


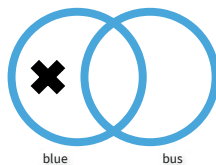


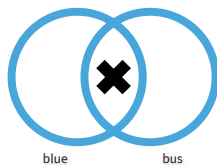
Show your work

#3

Which diagram represents this object?



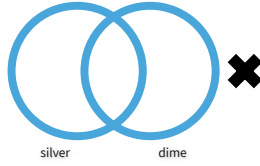
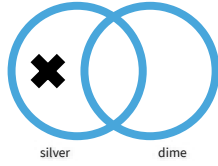
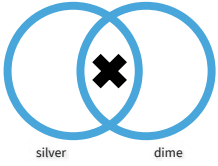




Show your work

#4

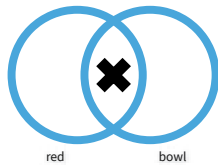
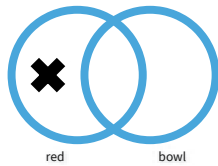
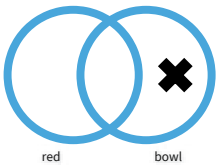
Which diagram represents this object?



Show your work

#5

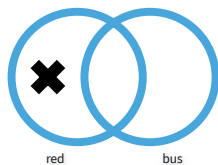
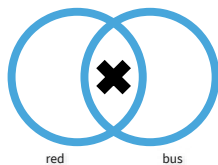
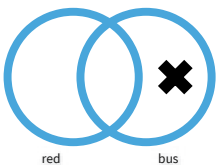
Which diagram represents this object?



Show your work

#6

Which diagram represents this object?

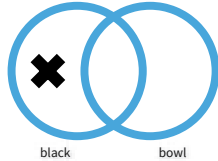
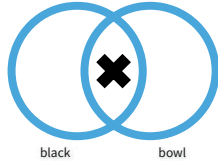
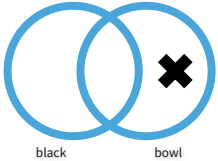


Show your work



#7

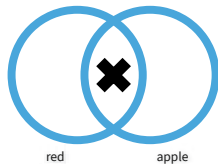
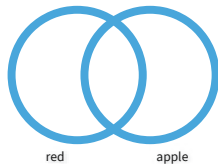
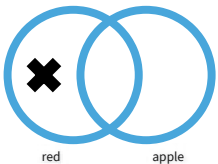
Which diagram represents this object?



Show your work

#8

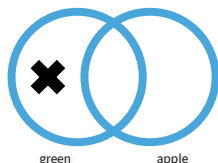
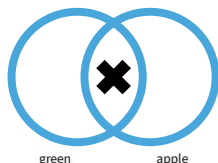
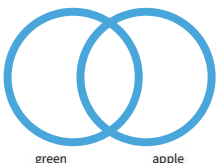
Which diagram represents this object?



Show your work

#9

Which diagram represents this object?

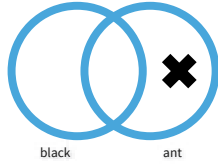
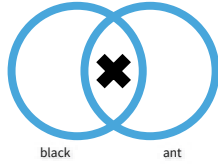
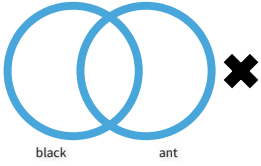


Show your work



#10

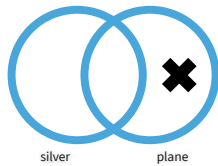
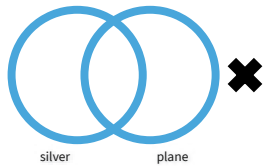
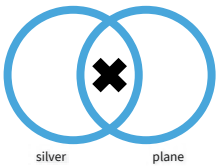
Which diagram represents this object?



Show your work

#11

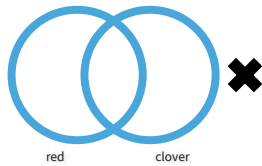
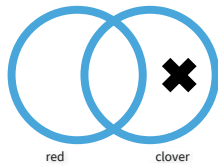
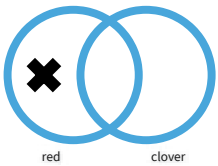
Which diagram represents this object?



Show your work

#12

Which diagram represents this object?



Show your work

Question	Answer
#1	choice 1
#2	choice 3
#3	choice 2
#4	choice 1
#5	choice 2
#6	choice 1
#7	choice 3
#8	choice 2
#9	choice 3
#10	choice 2
#11	choice 3
#12	choice 2