

#1


Count the fire trucks.

 10 20 50 30

Show your work

#2

Count the apples.

 70 10 50 90

Show your work

#3


Count the boxes.

 30 70 60 40

Show your work

#4

Count the oranges.




- 80 40
- 30 70

Show your work

#5

Count the grapes.




- 80 30
- 60 50

Show your work

#6

Count the grapes.



- 10 80
- 20 100

Show your work

#7

Count the trains.



- 10 20
- 30 60

Show your work

#8

Count the batteries.




- 90 30
- 100 20

Show your work

#9

Count the batteries.



- 90 70
- 80 100

Show your work

#10

Count the tricycles.




- 30 70
- 40 10

Show your work

#11

Count the action figures.



- 70 80
- 30 40

Show your work

#12

Count the tigers.



- 10 70
- 60 30

Show your work

Question	Answer
#1	choice 1
#2	choice 1
#3	choice 4
#4	choice 2
#5	choice 3
#6	choice 2
#7	choice 2
#8	choice 4
#9	choice 2
#10	choice 3
#11	choice 2
#12	choice 3