



#1

How many sides does this shape have?



1

3

6

4

Show your work

#2

How many corners does this shape have?



4

6


2

1

Show your work

#3

How many sides does this shape have?



1

7

5

4

Show your work



#4


How many sides does this shape have?

 3 5 4 6

Show your work

#5

How many sides does this shape have?

 4 1 3 5

Show your work

#6

How many corners does this shape have?

 6 3 4 0

Show your work



#7


How many corners does this shape have?

 4 5 3 7

Show your work

#8

How many sides does this shape have?

 7 5 4 3

Show your work

#9

How many sides does this shape have?

 4 3 2 1

Show your work



#10

How many sides does this shape have?

 4 1 7 5

Show your work

#11

How many corners does this shape have?

 1 0 6 3

Show your work

#12

How many sides does this shape have?

 4 1 3 2

Show your work

Question	Answer
#1	3
#2	4
#3	4
#4	4
#5	4
#6	3
#7	4
#8	4
#9	4
#10	4
#11	3
#12	4