




#1

How many sides does this shape have?



0

4


3

6

Show your work

#2

How many corners does this shape have?



4

7


5

6

Show your work

#3

How many sides does this shape have?



3

4

1

5

Show your work



#4

How many sides does this shape have?



1

2


5

4

Show your work

#5

How many sides does this shape have?



5

9


7

6

Show your work

#6

How many sides does this shape have?



8

4

6

3

Show your work



#7

How many sides does this shape have?



3

5


1

4

Show your work

#8

How many sides does this shape have?



4

0


1

3

Show your work

#9

How many sides does this shape have?



4

6

1


2

Show your work



#10

How many corners does this shape have?



3

5


0

4

Show your work

#11

How many sides does this shape have?



6

4

1

7

Show your work

#12

How many corners does this shape have?



5

6

1

4

Show your work

Question	Answer
#1	3
#2	6
#3	4
#4	4
#5	6
#6	6
#7	4
#8	3
#9	4
#10	3
#11	4
#12	4