



#1

How many corners does this shape have?



4

3


9

6

Show your work

#2

How many sides does this shape have?



4

1

3

0

Show your work

#3

How many sides does this shape have?



4

5

1

6

Show your work



#4

How many corners does this shape have?



2

3

4

6

Show your work

#5

How many sides does this shape have?



6

4


8

9

Show your work

#6

How many corners does this shape have?



1

6

3

4

Show your work



#7

How many sides does this shape have?




- 1
- 4
- 6
- 2

Show your work

#8

How many corners does this shape have?



- 2
- 6
- 4
- 5

Show your work

#9

How many corners does this shape have?



- 4
- 7
- 3
- 1

Show your work



#10

How many corners does this shape have?



6

0

1

3

Show your work

#11

How many corners does this shape have?



7

3

5

4

Show your work

#12

How many corners does this shape have?



4

7

6

3

Show your work

Question	Answer
#1	6
#2	3
#3	4
#4	4
#5	6
#6	4
#7	4
#8	4
#9	4
#10	3
#11	4
#12	4