

#1

Add



= ?

2

5

8

3

Show your work

#2

Add



= ?

2

3

5

4

Show your work

#3

Add

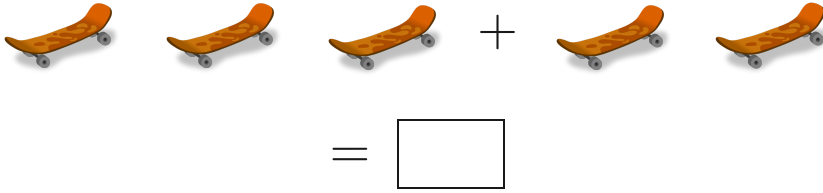


=

Show your work

#4

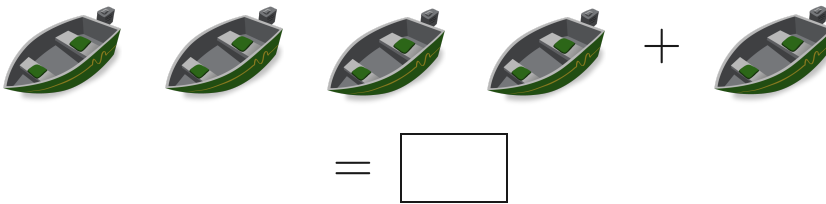
Add



Show your work

#5

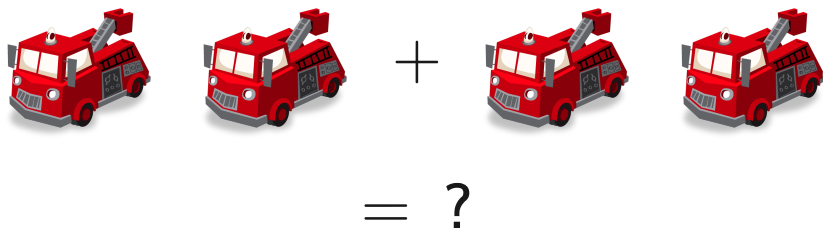
Add



Show your work

#6

Add



4

2

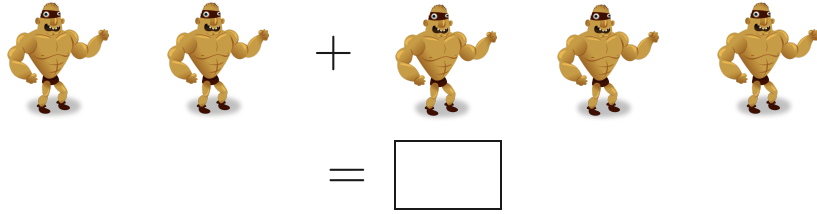
5

7

Show your work

#7

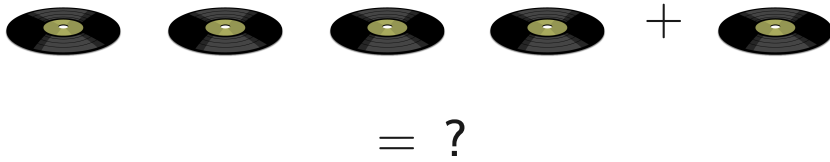
Add



Show your work

#8

Add



2

3


7

5

Show your work

#9

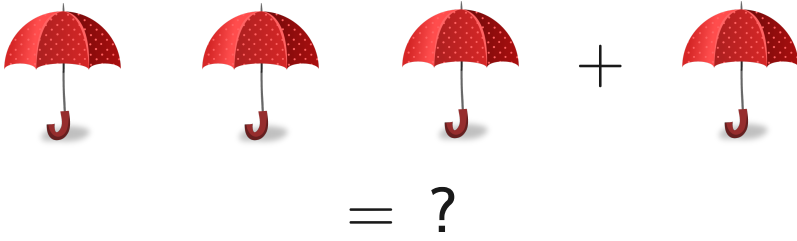
Add



Show your work

#10

Add



1

2


4

3

Show your work

#11

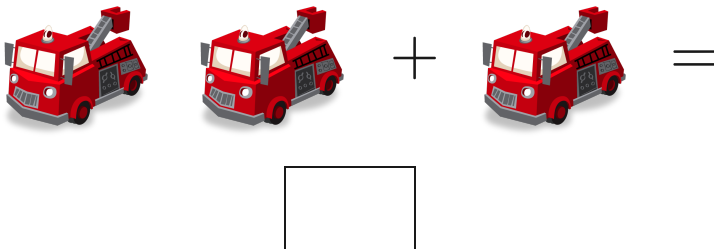
Add



Show your work

#12

Add



Show your work

Question	Answer
#1	5
#2	5
#3	5
#4	5
#5	5
#6	4
#7	5
#8	5
#9	5
#10	4
#11	4
#12	3