



#1



Which picture shows $7 + 1 = 8$?



Show your work

#2



Which picture shows $2 + 8 = 10$?



Show your work

#3



Which picture shows $9 + 1 = 10$?



Show your work

#4



Which picture shows $8 + 2 = 10$?



Show your work

#5



Which picture shows $4 + 3 = 7$?



Show your work

#6



Which picture shows $8 + 1 = 9$?



Show your work

#7



Which picture shows $9 + 1 = 10$?



Show your work

#8



Which picture shows $9 + 1 = 10$?



Show your work

#9



Which picture shows $7 + 3 = 10$?



Show your work

#10



Which picture shows $3 + 6 = 9$?



Show your work

#11



Which picture shows $5 + 4 = 9$?



Show your work

#12

Which picture shows $8 + 2 = 10$?



Show your work

Question	Answer
#1	choice 2
#2	choice 2
#3	choice 1
#4	choice 1
#5	choice 2
#6	choice 2
#7	choice 1
#8	choice 1
#9	choice 1
#10	choice 1
#11	choice 2
#12	choice 2