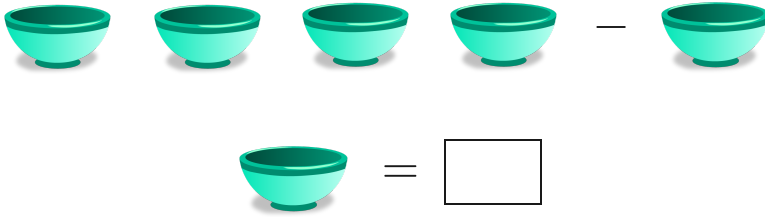


#1

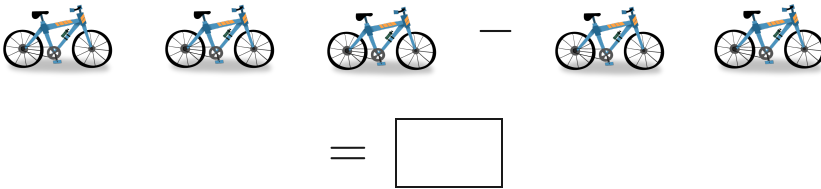
Subtract



Show your work

#2


Subtract



Show your work

#3

Subtract



5

0

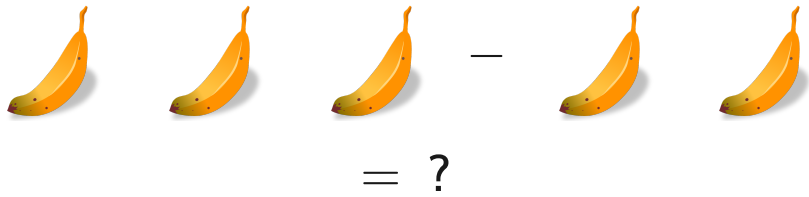
6

3

Show your work

#4

Subtract



3

2

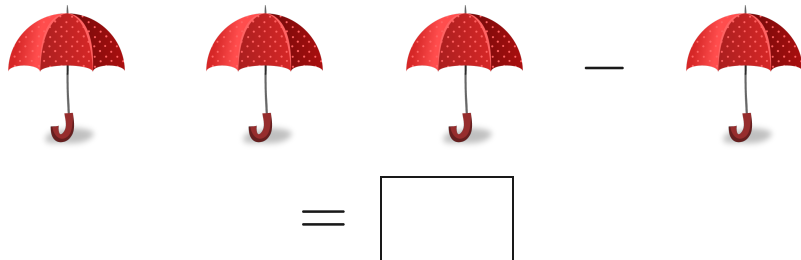
1

0

Show your work

#5

Subtract



Show your work

#6

Subtract



4

2

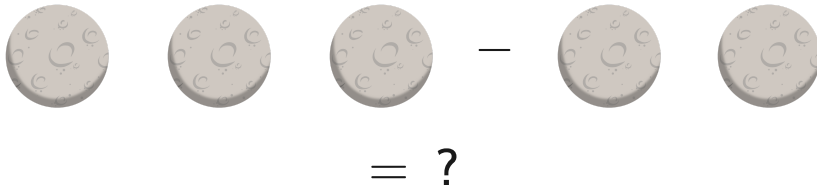
1

5

Show your work

#7

Subtract



2

4

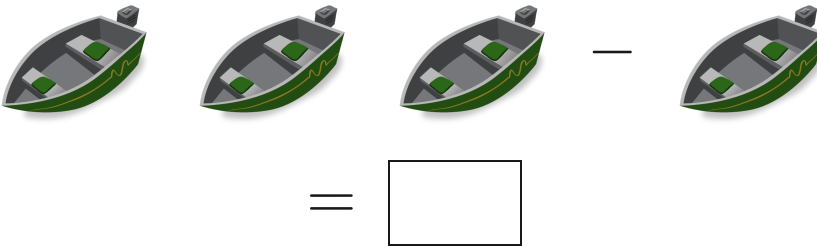
1

3

Show your work

#8

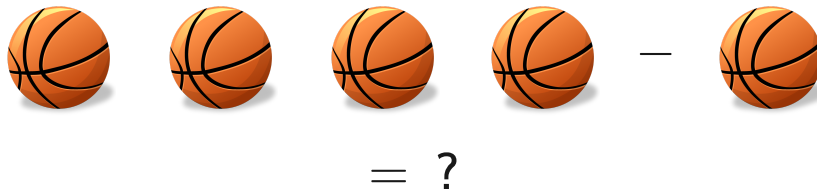
Subtract



Show your work

#9

Subtract



1

5

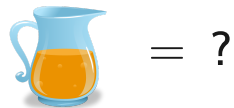
4

3

Show your work

#10

Subtract



4

0


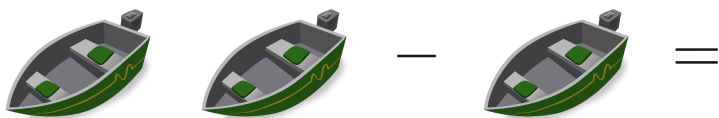
2

1

Show your work

#11

Subtract



Show your work

#12

Subtract



3

4

2

5

Show your work

Question	Answer
#1	2
#2	1
#3	3
#4	1
#5	2
#6	2
#7	1
#8	2
#9	3
#10	2
#11	1
#12	2