


#1

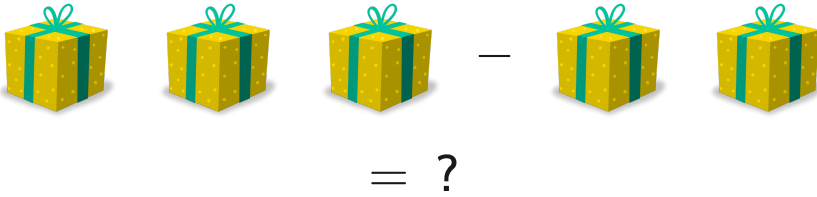
Subtract



Show your work

#2

Subtract



☐ 1

☐ 3

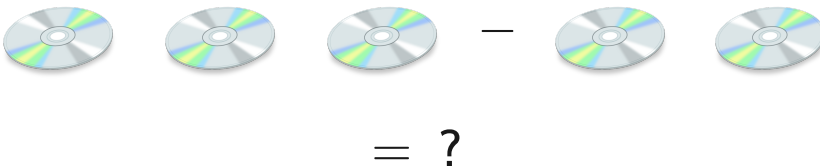
☐ 2

☐ 0

Show your work

#3

Subtract



☐ 0

☐ 2


☐ 3

☐ 1

Show your work

#4

Subtract



☐ 2

☐ 5


☐ 3

☐ 0

Show your work

#5

Subtract



☐ 3

☐ 1

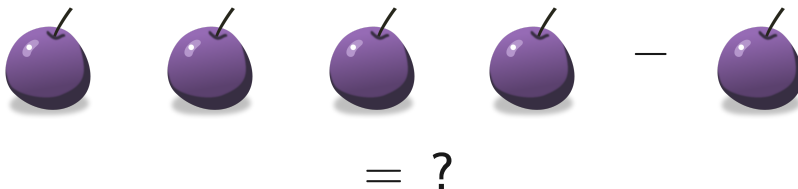
☐ 5

☐ 2

Show your work

#6

Subtract



☐ 5

☐ 0


☐ 3

☐ 2

Show your work

#7

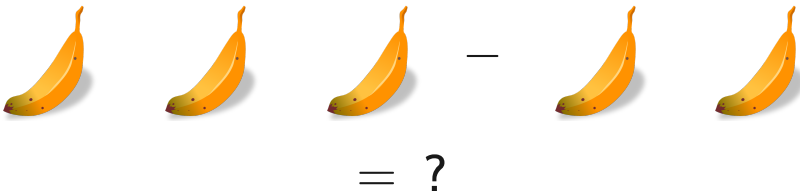
Subtract



Show your work

#8

Subtract



☐ 3

☐ 2

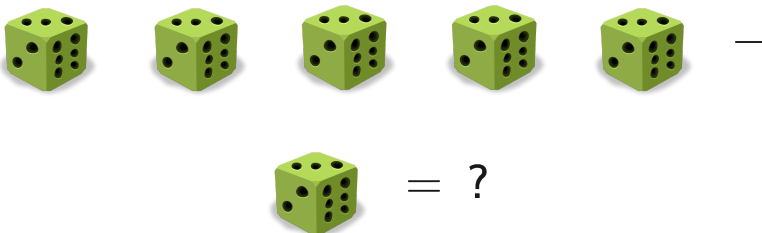
☐ 1

☐ 0

Show your work

#9

Subtract



☐ 7

☐ 5

☐ 4

☐ 6

Show your work

#10

Subtract



☐ 1

☐ 2

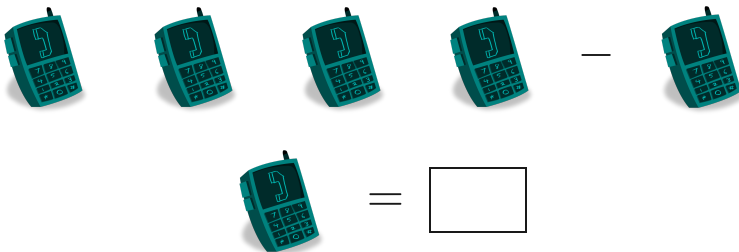
☐ 4

☐ 0

Show your work

#11


Subtract



Show your work

#12

Subtract



☐ 4

☐ 0

☐ 1

☐ 2

Show your work

Question	Answer
#1	2
#2	1
#3	1
#4	3
#5	2
#6	3
#7	1
#8	1
#9	4
#10	1
#11	2
#12	1