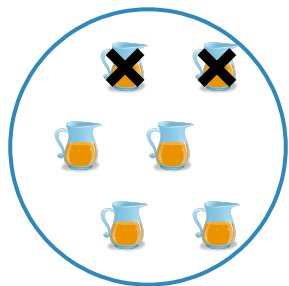
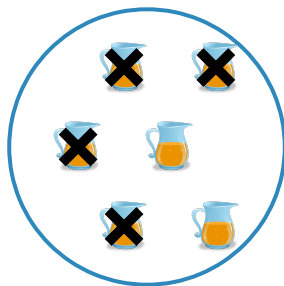


#1

Which picture shows $6 - 2 = 4$?

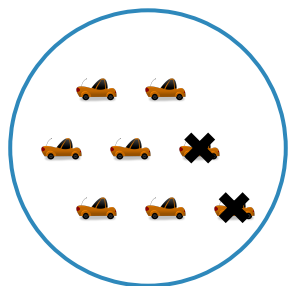


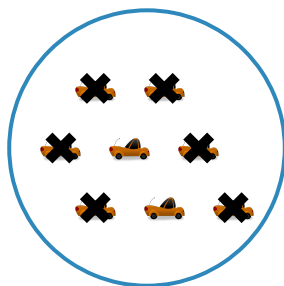


Show your work

#2

Which picture shows $8 - 6 = 2$?







Show your work

#3

Which picture shows $8 - 5 = 3$?




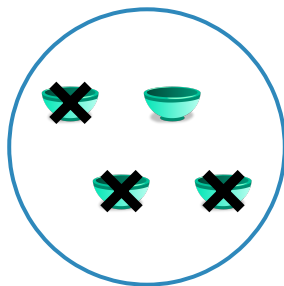


Show your work

#4

Which picture shows $4 - 1 = 3$?

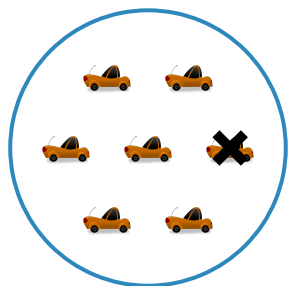


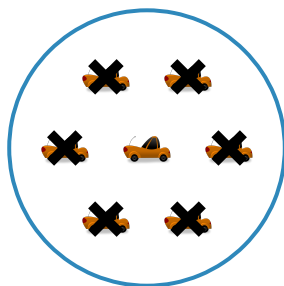


Show your work

#5

Which picture shows $7 - 6 = 1$?




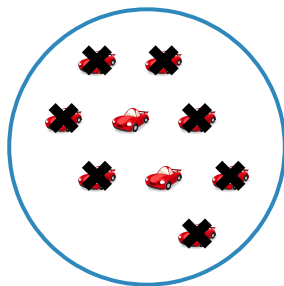


Show your work

#6

Which picture shows $9 - 7 = 2$?

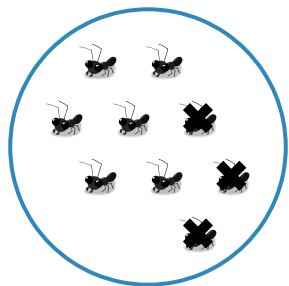


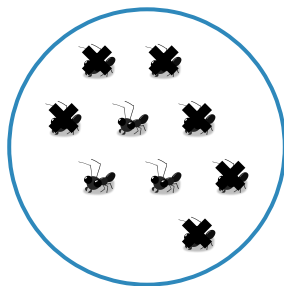


Show your work

#7

Which picture shows $9 - 3 = 6$?

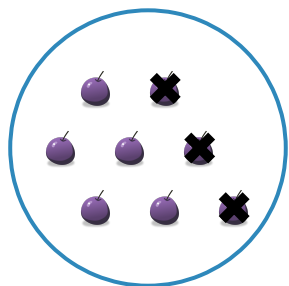


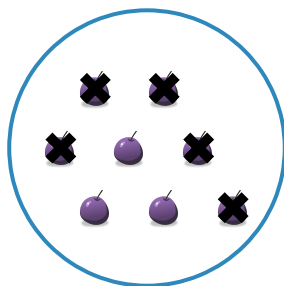


Show your work

#8

Which picture shows $8 - 5 = 3$?







Show your work

#9

Which picture shows $3 - 1 = 2$?

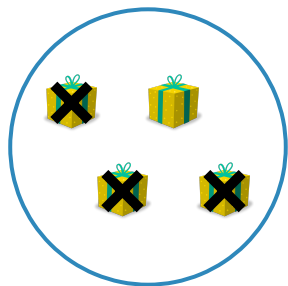


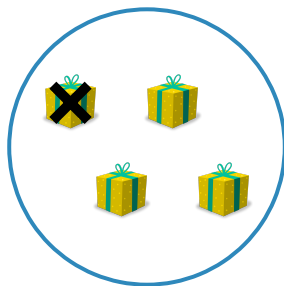


Show your work

#10

Which picture shows $4 - 1 = 3$?







Show your work

#11

Which picture shows $6 - 4 = 2$?







Show your work

#12

Which picture shows $4 - 1 = 3$?





Show your work

Question	Answer
#1	choice 1
#2	choice 2
#3	choice 2
#4	choice 1
#5	choice 2
#6	choice 2
#7	choice 1
#8	choice 2
#9	choice 1
#10	choice 2
#11	choice 2
#12	choice 1