



#1

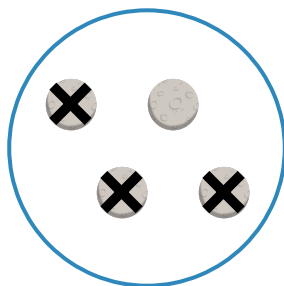

Which picture shows $6 - 2 = 4$?



Show your work

#2

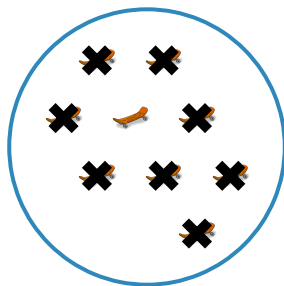

Which picture shows $4 - 3 = 1$?



Show your work

#3


Which picture shows $9 - 1 = 8$?

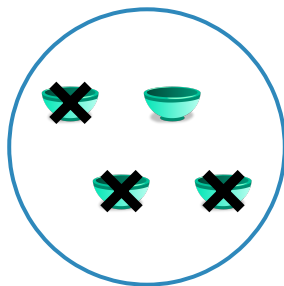


Show your work

#4

Which picture shows $4 - 3 = 1$?

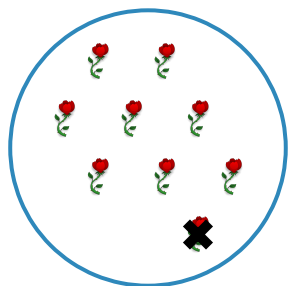


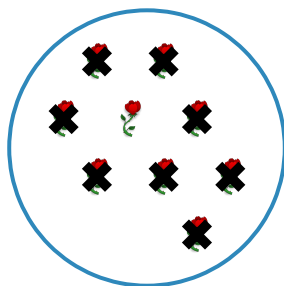


Show your work

#5

Which picture shows $9 - 1 = 8$?

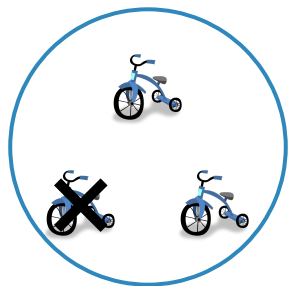


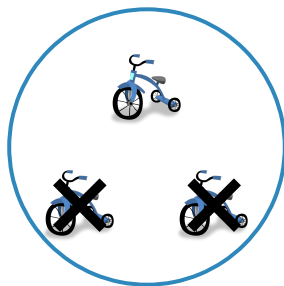


Show your work

#6

Which picture shows $3 - 1 = 2$?

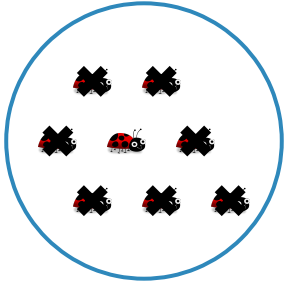


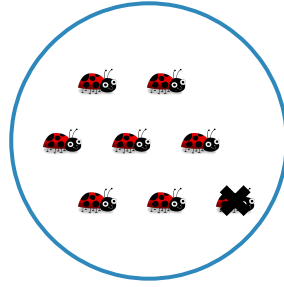


Show your work

#7

Which picture shows $8 - 7 = 1$?

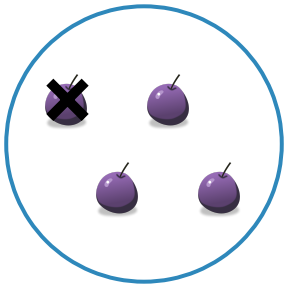


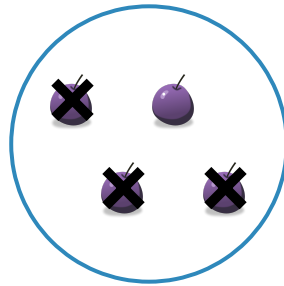


Show your work

#8

Which picture shows $4 - 1 = 3$?

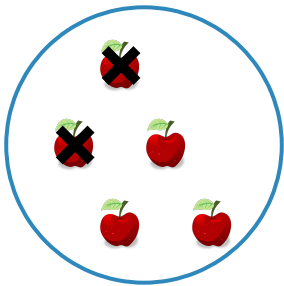


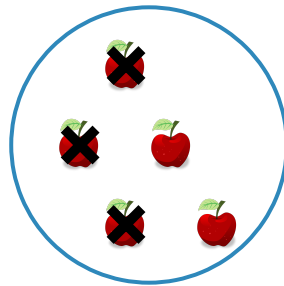


Show your work

#9

Which picture shows $5 - 3 = 2$?







Show your work

#10

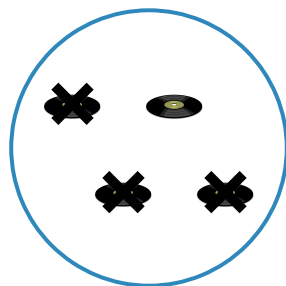
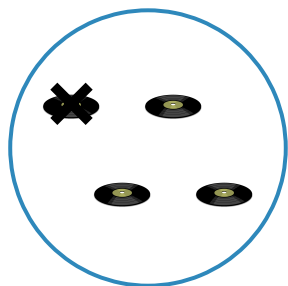
Which picture shows $3 - 1 = 2$?



Show your work

#11

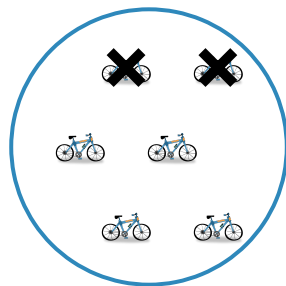
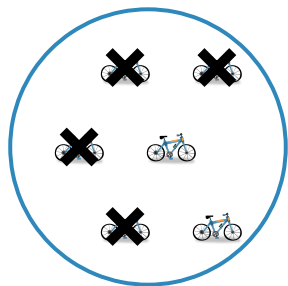
Which picture shows $4 - 1 = 3$?



Show your work

#12

Which picture shows $6 - 2 = 4$?



Show your work

Question	Answer
#1	choice 1
#2	choice 2
#3	choice 1
#4	choice 2
#5	choice 1
#6	choice 1
#7	choice 1
#8	choice 1
#9	choice 2
#10	choice 1
#11	choice 1
#12	choice 2