


#1

How many vertices does this object have?



- 7
- 3
- 5
- 2

Show your work

#2

How many edges does this object have?




- 7
- 3
- 4
- 6

Show your work

#3

How many vertices does this object have?



- 4
- 3
- 5
- 2

Show your work

#4

How many edges does this object have?



- 7
- 8
- 6
- 10

Show your work

#5

How many faces does this object have?



- 4
- 1
- 3
- 7

Show your work

#6

How many faces does this object have?




- 6
- 4
- 7
- 1

Show your work

#7

How many edges does this object have?



- 13
- 8
- 15
- 12

Show your work

#8

How many faces does this object have?



- 7
- 3
- 4
- 5

Show your work

#9

How many faces does this object have?



- 2
- 4
- 1
- 6

Show your work



#10


How many faces does this object have?

 2 5 6 3

Show your work

#11


How many edges does this object have?

 8 10 12 13

Show your work

#12

How many vertices does this object have?

 9 11 8 10

Show your work

Question	Answer
#1	5
#2	6
#3	5
#4	8
#5	4
#6	4
#7	12
#8	5
#9	4
#10	5
#11	12
#12	8