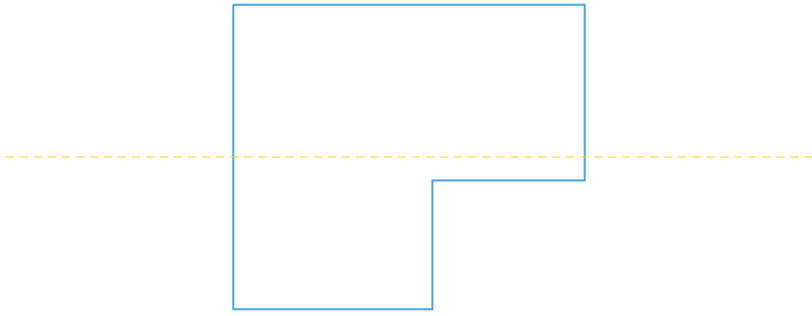


#1

Is the dotted line a line of symmetry?



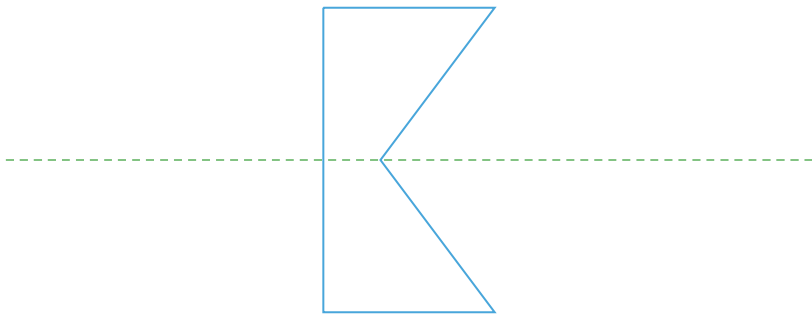
Yes

No

Show your work

#2

Is the dotted line a line of symmetry?



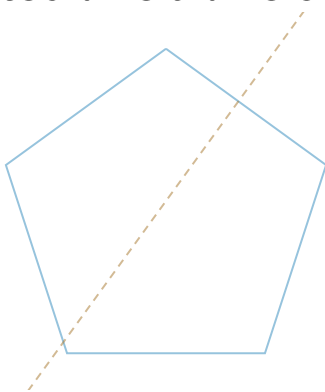
No

Yes

Show your work

#3

Is the dotted line a line of symmetry?



No

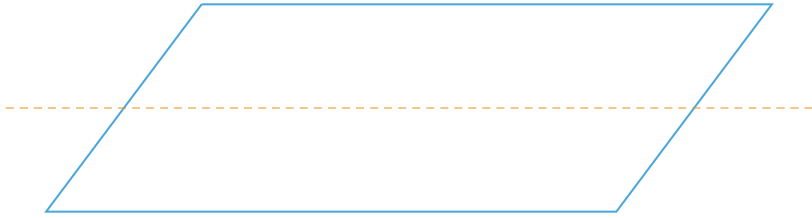
Yes

Show your work



#4

Is the dotted line a line of symmetry?



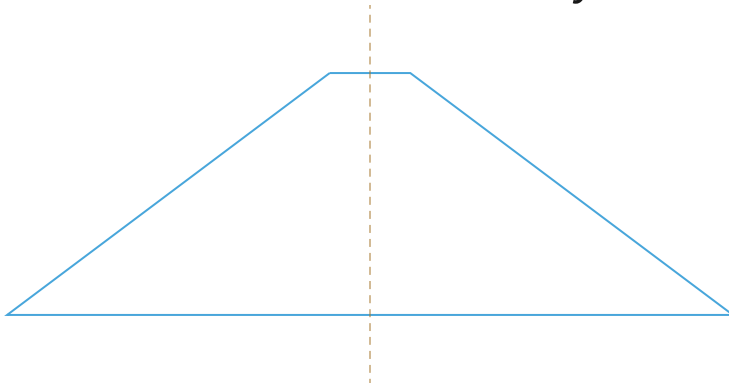
Yes

No

Show your work

#5

Is the dotted line a line of symmetry?



Yes

No

Show your work

#6

Is the dotted line a line of symmetry?



No

Yes

Show your work

#7

Is the dotted line a line of symmetry?

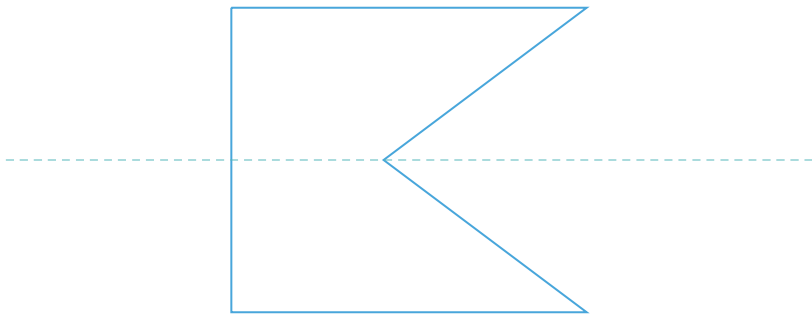


- No
 Yes

Show your work

#8

Is the dotted line a line of symmetry?

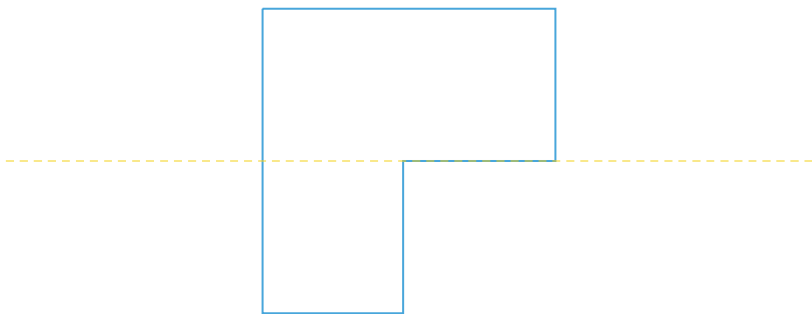


- No
 Yes

Show your work

#9

Is the dotted line a line of symmetry?

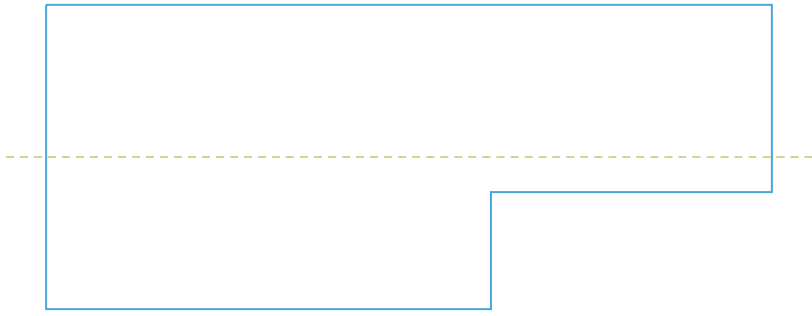


- Yes
 No

Show your work

#10

Is the dotted line a line of symmetry?



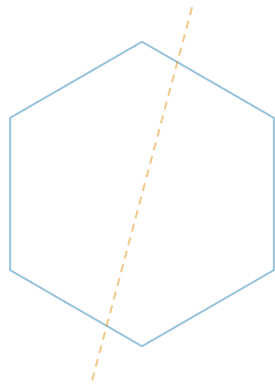
No

Yes

Show your work

#11

Is the dotted line a line of symmetry?




No

Yes

Show your work

#12

Is the dotted line a line of symmetry?



Yes

No

Show your work

Question	Answer
#1	choice 2
#2	choice 2
#3	choice 2
#4	choice 2
#5	choice 1
#6	choice 2
#7	choice 1
#8	choice 2
#9	choice 2
#10	choice 1
#11	choice 1
#12	choice 1