


#1 Which objects have the same shape as this one.



Show your work

#2 Which objects have the same shape as this one.




Show your work

#3 Which objects have the same shape as this one.




Show your work

#4 Which objects have the same shape as this one.




Show your work

#5 Which objects have the same shape as this one.




Show your work

#6 Which objects have the same shape as this one.



Show your work

#7 Which objects have the same shape as this one.



Show your work

#8 Which objects have the same shape as this one.



Show your work

#9 Which objects have the same shape as this one.



Show your work



#10


Which objects have the same shape as this one.



Show your work

#11


Which objects have the same shape as this one.



Show your work

#12

Which objects have the same shape as this one.



Show your work

Question	Answer
#1	choice 4, choice 1
#2	choice 1, choice 4
#3	choice 4
#4	choice 1, choice 4
#5	choice 1
#6	choice 3, choice 2
#7	choice 1, choice 2
#8	choice 3
#9	choice 4, choice 2
#10	choice 3
#11	choice 4
#12	choice 4, choice 2