


#1 Which objects have the same shape as this one.



Show your work

#2 Which objects have the same shape as this one.




Show your work

#3 Which objects have the same shape as this one.




Show your work

#4 Which objects have the same shape as this one.



Show your work

#5 Which objects have the same shape as this one.



Show your work

#6 Which objects have the same shape as this one.




Show your work

#7 Which objects have the same shape as this one.




Show your work

#8 Which objects have the same shape as this one.



Show your work

#9 Which objects have the same shape as this one.




Show your work

#10 Which objects have the same shape as this one.




Show your work

#11 Which objects have the same shape as this one.



Show your work

#12 Which objects have the same shape as this one.



Show your work

Question	Answer
#1	choice 4, choice 2
#2	choice 2, choice 1
#3	choice 4
#4	choice 4
#5	choice 3, choice 1
#6	choice 3
#7	choice 3
#8	choice 4
#9	choice 2, choice 4
#10	choice 1
#11	choice 1
#12	choice 1