



#1

Which objects have the same shape as this one.



Show your work

#2

Which objects have the same shape as this one.



Show your work

#3

Which objects have the same shape as this one.



Show your work

#4 Which objects have the same shape as this one.



Show your work

#5 Which objects have the same shape as this one.



Show your work

#6 Which objects have the same shape as this one.



Show your work

#7 Which objects have the same shape as this one.




Show your work

#8 Which objects have the same shape as this one.



Show your work


#9 Which objects have the same shape as this one.



Show your work

#10


Which objects have the same shape as this one.



Show your work

#11

Which objects have the same shape as this one.



Show your work

#12

Which objects have the same shape as this one.



Show your work

Question	Answer
#1	choice 4, choice 1
#2	choice 3
#3	choice 4
#4	choice 3
#5	choice 3
#6	choice 4
#7	choice 3, choice 4
#8	choice 1, choice 3
#9	choice 3, choice 2
#10	choice 3, choice 1
#11	choice 3, choice 4
#12	choice 3