


#1

How many edges does this object have?



- 6
- 8
- 9
- 10

Show your work

#2

How many edges does this object have?



- 10
- 9
- 8
- 11

Show your work

#3

How many edges does this object have?




- 12
- 11
- 16
- 8

Show your work

#4

How many edges does this object have?



- 10
- 12
- 16
- 9

Show your work

#5

How many edges does this object have?



- 6
- 7
- 9
- 3

Show your work

#6

How many edges does this object have?




- 15
- 12
- 9
- 13

Show your work

#7

How many edges does this object have?



- 15
- 12
- 10
- 8

Show your work

#8

How many edges does this object have?



- 9
- 7
- 8
- 6

Show your work

#9

How many edges does this object have?




- 6
- 12
- 11
- 9

Show your work

#10

How many edges does this object have?



8

9


13

12

Show your work

#11

How many edges does this object have?



9

11

15

12

Show your work

#12

How many edges does this object have?



7

10

9

8

Show your work

Question	Answer
#1	8
#2	8
#3	12
#4	12
#5	6
#6	12
#7	12
#8	8
#9	9
#10	12
#11	12
#12	9