


#1

How many edges does this object have?



- 7
- 9
- 6
- 8

Show your work

#2

How many edges does this object have?



- 11
- 7
- 9
- 8

Show your work

#3

How many edges does this object have?




- 4
- 6
- 5
- 7

Show your work

#4

How many edges does this object have?




- 10
- 5
- 8
- 9

Show your work

#5

How many edges does this object have?




- 9
- 11
- 7
- 12

Show your work

#6

How many edges does this object have?



- 10
- 8
- 6
- 5

Show your work

#7

How many edges does this object have?



- 9
- 7
- 4
- 6

Show your work

#8

How many edges does this object have?



- 5
- 11
- 8
- 6

Show your work

#9

How many edges does this object have?




- 6
- 12
- 11
- 9

Show your work

#10

How many edges does this object have?



- 9
- 7
- 8
- 6

Show your work

#11

How many edges does this object have?




- 6
- 9
- 8
- 10

Show your work

#12

How many edges does this object have?



- 12
- 9
- 10
- 11

Show your work

Question	Answer
#1	8
#2	8
#3	6
#4	8
#5	9
#6	8
#7	6
#8	8
#9	9
#10	8
#11	8
#12	9