




#1

How many vertices does this object have?

 7 8 5 9

Show your work

#2

How many vertices does this object have?

 7 6 5 4

Show your work

#3

How many vertices does this object have?


 8 4 2 5

Show your work



#4


How many vertices does this object have?

 7 5 10 8

Show your work

#5


How many vertices does this object have?

 8 9 11 7

Show your work

#6

How many vertices does this object have?

 9 6 10 8

Show your work



#7


How many vertices does this object have?

 4 3 5 1

Show your work

#8

How many vertices does this object have?

 8 10 11 7

Show your work

#9

How many vertices does this object have?


 7 6 3 9

Show your work



#10

How many vertices does this object have?

 4 3 6 8

Show your work

#11


How many vertices does this object have?

 6 4 5 7

Show your work

#12

How many vertices does this object have?

 8 10 11 5

Show your work

Question	Answer
#1	8
#2	5
#3	5
#4	8
#5	8
#6	8
#7	4
#8	8
#9	6
#10	6
#11	5
#12	8