




#1

How many vertices does this object have?



8

7

2

5

Show your work

#2

How many vertices does this object have?



2

7


5

6

Show your work

#3

How many vertices does this object have?



5

7

6


4

Show your work



#4

How many vertices does this object have?



9

8


11

5

Show your work

#5

How many vertices does this object have?



8

6


7

11

Show your work

#6

How many vertices does this object have?



9

7

6


8

Show your work



#7

How many vertices does this object have?



10

11


8

6

Show your work

#8

How many vertices does this object have?



5

3

4

7

Show your work

#9

How many vertices does this object have?



6

5

7

2

Show your work



#10

How many vertices does this object have?



7

5


6

4

Show your work

#11

How many vertices does this object have?



9

6


10

8

Show your work

#12

How many vertices does this object have?



8

10

11

5

Show your work

Question	Answer
#1	5
#2	5
#3	6
#4	8
#5	8
#6	6
#7	8
#8	4
#9	5
#10	5
#11	8
#12	8