



#1


How many vertices does this object have?

 4 3 5 1

Show your work

#2


How many vertices does this object have?

 8 5 10 11

Show your work

#3

How many vertices does this object have?


 7 6 5 4

Show your work



#4

How many vertices does this object have?

 5 7 4 2

Show your work

#5


How many vertices does this object have?

 6 4 5 7

Show your work

#6

How many vertices does this object have?


 5 6 10 8

Show your work



#7

How many vertices does this object have?

 9 7 6 8

Show your work

#8

How many vertices does this object have?

 3 8 6 5

Show your work

#9

How many vertices does this object have?


 7 5 8 6

Show your work



#10

How many vertices does this object have?

 9 10 8 5

Show your work

#11

How many vertices does this object have?

 4 2 3 1

Show your work

#12

How many vertices does this object have?

 7 1 4 2

Show your work

Question	Answer
#1	4
#2	8
#3	5
#4	5
#5	5
#6	8
#7	6
#8	5
#9	8
#10	8
#11	4
#12	4