


#1

How many faces does this object have?



6

8


2

5

Show your work

#2

How many faces does this object have?



9

6


5

7

Show your work

#3

How many faces does this object have?



7

4

6


3

Show your work



#4

How many faces does this object have?

 2 3 5 8

Show your work

#5

How many faces does this object have?

 7 8 2 5

Show your work

#6

How many faces does this object have?

 6 7 4 5

Show your work



#7

How many faces does this object have?

 1 4 6 3

Show your work

#8

How many faces does this object have?

 6 4 1 2

Show your work

#9

How many faces does this object have?


 5 4 6 3

Show your work



#10

How many faces does this object have?

 4 5 3 8

Show your work

#11

How many faces does this object have?

 6 7 1 4

Show your work

#12

How many faces does this object have?

 6 8 4 5

Show your work

Question	Answer
#1	5
#2	6
#3	6
#4	5
#5	5
#6	6
#7	4
#8	4
#9	5
#10	5
#11	4
#12	6