


#1

How many faces does this object have?




- 6
- 4
- 5
- 7

Show your work

#2

How many faces does this object have?



- 6
- 8
- 9
- 5

Show your work

#3

How many faces does this object have?




- 4
- 6
- 2
- 5

Show your work

#4

How many faces does this object have?




- 6 4
 9 8

Show your work

#5

How many faces does this object have?




- 3 5
 4 2

Show your work

#6

How many faces does this object have?




- 5 3
 7 4

Show your work



#7


How many faces does this object have?

 7 4 5 3

Show your work

#8

How many faces does this object have?

 9 6 7 4

Show your work

#9

How many faces does this object have?

 2 7 1 4

Show your work



#10


How many faces does this object have?

 1 5 4 6

Show your work

#11


How many faces does this object have?

 9 6 5 7

Show your work

#12

How many faces does this object have?

 6 7 9 8

Show your work

Question	Answer
#1	6
#2	6
#3	5
#4	6
#5	5
#6	5
#7	5
#8	6
#9	4
#10	4
#11	6
#12	6