

#1

What kind of shape is this?




- cylinder
 square
 cone

Show your work

#2

What kind of shape is this?




- cube
 rectangular pyramid
 rectangular prism

Show your work

#3

What kind of shape is this?




- cone
 triangular prism
 cylinder

Show your work

#4

What kind of shape is this?



- triangular prism rectangular prism triangular pyramid

Show your work

#5

What kind of shape is this?



- cylinder triangular pyramid cube

Show your work

#6

What kind of shape is this?




- cylinder rectangular prism square

Show your work

#7

What kind of shape is this?




- circle
 rectangle
 pentagon

Show your work

#8

What kind of shape is this?




- triangular pyramid
 cube
 rectangle

Show your work

#9

What kind of shape is this?




- hexagon
 rectangle
 triangle

Show your work

#10

What kind of shape is this?




- rectangular prism
 cone
 circle

Show your work

#11

What kind of shape is this?



- triangle
 triangular prism
 circle

Show your work

#12

What kind of shape is this?



- hexagon
 triangle
 parallelogram

Show your work

Question	Answer
#1	choice 2
#2	choice 1
#3	choice 1
#4	choice 3
#5	choice 1
#6	choice 1
#7	choice 1
#8	choice 2
#9	choice 3
#10	choice 2
#11	choice 2
#12	choice 3