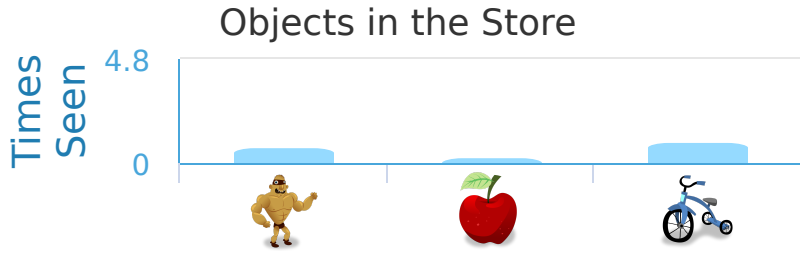


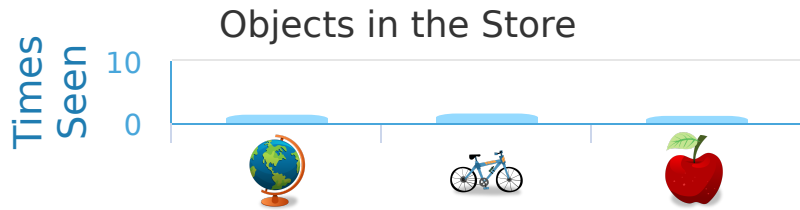
#1 While at the store Kaitlyn made a bar graph of all the things that she'd seen. How many more action figures than apples did Kaitlyn see?






- 4 more
- 3 more
- 2 more
- 1 more

Show your work

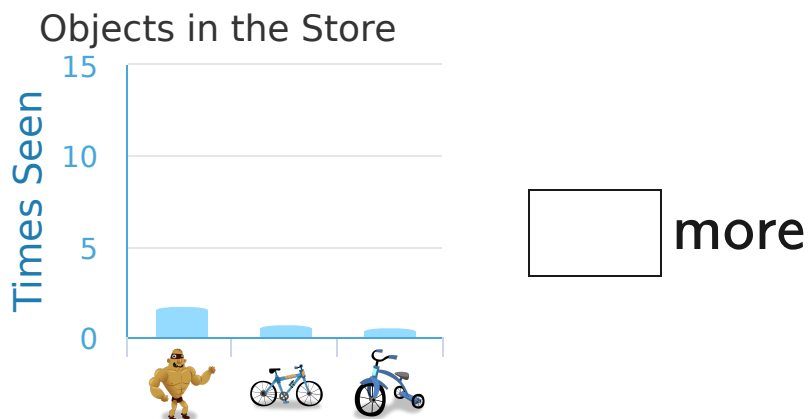
#2 While at the store Gabriel made a bar graph of all the things that he'd seen. Which things did Gabriel see most?



- 
- 
- 

Show your work

#3 While at the store Noah made a bar graph of all the things that he'd seen. How many more action figures than bicycles did Noah see?

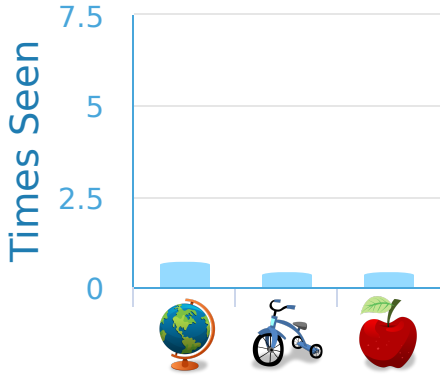


Show your work

#4

While at the store Jacob made a bar graph of all the things that he'd seen. How many more globes than tricycles did Jacob see?

Objects in the Store



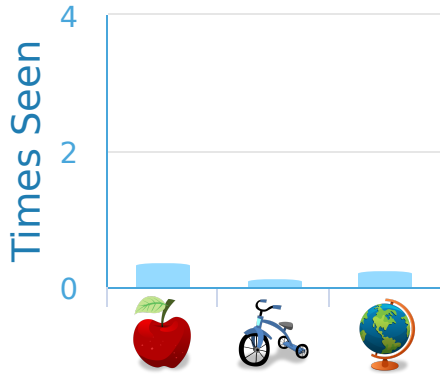
more

Show your work

#5

While at the store Ethan made a bar graph of all the things that he'd seen. How many more apples than tricycles did Ethan see?

Objects in the Store



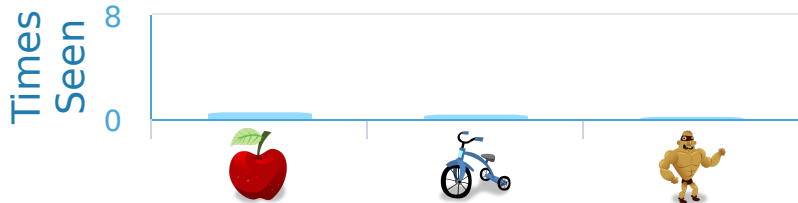
more

Show your work

#6

While at the store Caleb made a bar graph of all the things that he'd seen. How many more apples than tricycles did Caleb see?

Objects in the Store

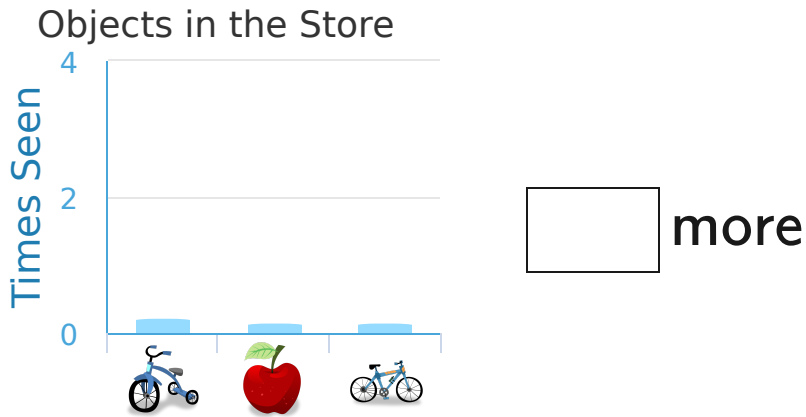


- 2 more
- 3 more
- 1 more
- 5 more

Show your work

#7

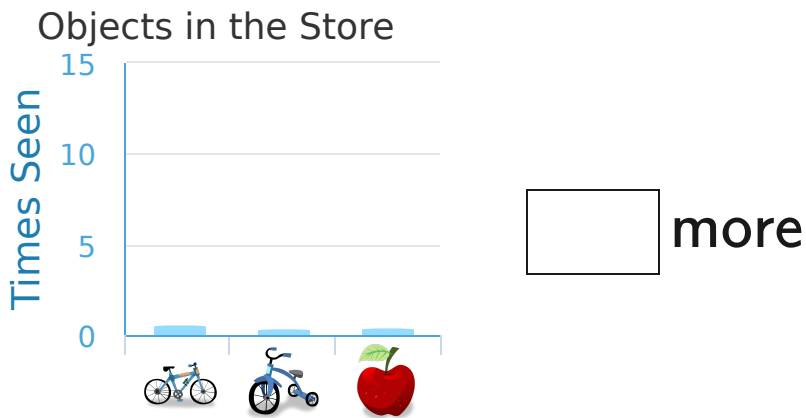
While at the store Landon made a bar graph of all the things that he'd seen. How many more tricycles than apples did Landon see?



Show your work

#8

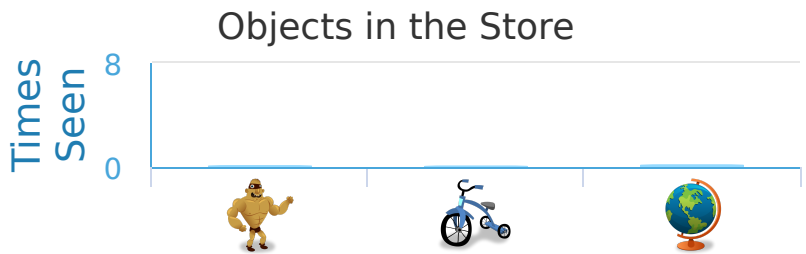
While at the store Anthony made a bar graph of all the things that he'd seen. How many more bicycles than tricycles did Anthony see?



Show your work

#9

While at the store Andrew made a bar graph of all the things that he'd seen. How many more action figures than tricycles did Andrew see?

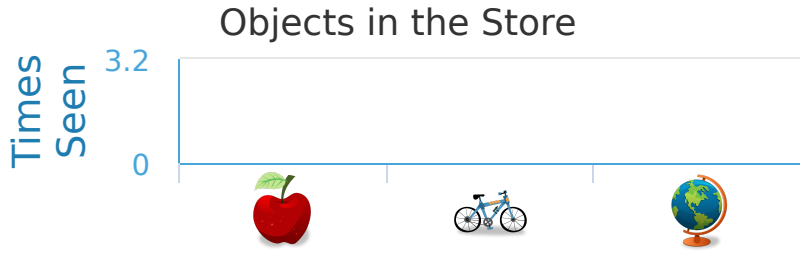


- 4 more
- 1 more
- 2 more
- 3 more

Show your work

#10

While at the store Dylan made a bar graph of all the things that he'd seen. How many more apples than bicycles did Dylan see?



- 1 more
- 4 more
- 2 more
- 3 more

Show your work

#11

While at the store Emma made a bar graph of all the things that she'd seen. How many more action figures than apples did Emma see?

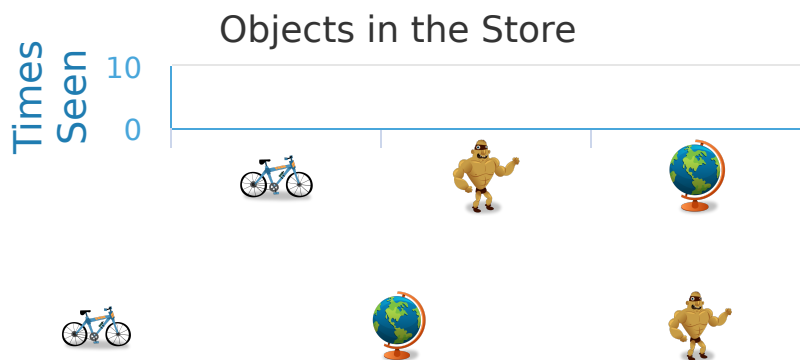


more

Show your work

#12

While at the store Julia made a bar graph of all the things that she'd seen. Which things did Julia see most?



-
-
-

Show your work

Question	Answer
#1	choice 3
#2	choice 2
#3	6
#4	2
#5	2
#6	choice 1
#7	1
#8	4
#9	choice 2
#10	choice 1
#11	5
#12	choice 3