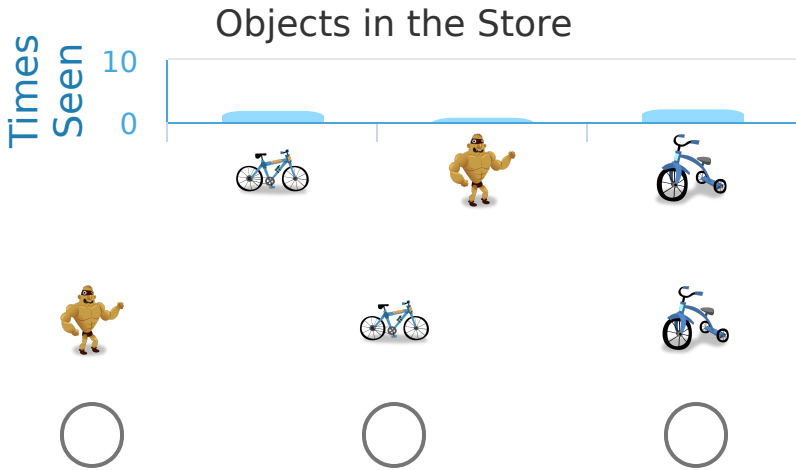


#1

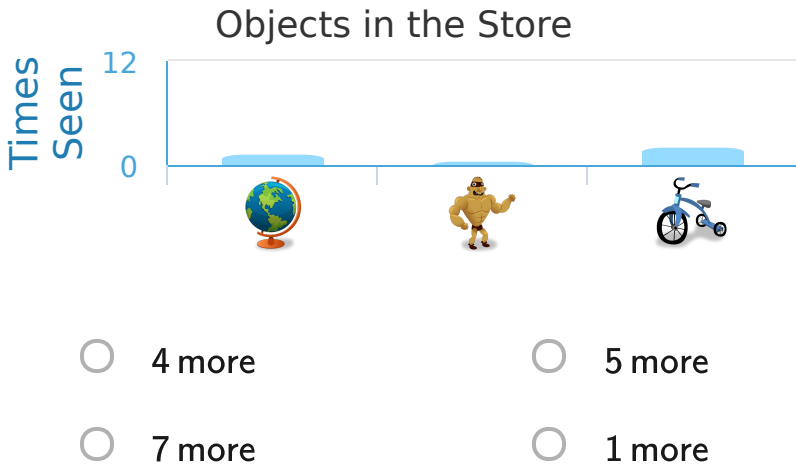
While at the store Sarah made a bar graph of all the things that she'd seen. Which things did Sarah see most?



Show your work

#2


While at the store Austin made a bar graph of all the things that he'd seen. How many more globes than action figures did Austin see?



Show your work

#3

While at the store Joseph made a bar graph of all the things that he'd seen. How many more tricycles than bicycles did Joseph see?

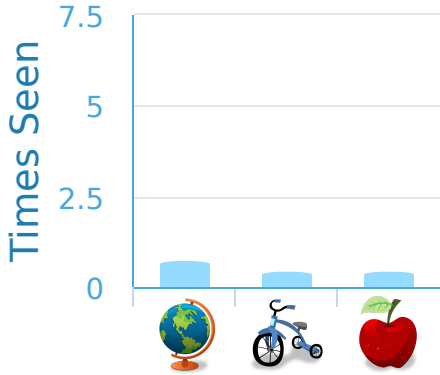


Show your work

#4

While at the store Jacob made a bar graph of all the things that he'd seen. How many more globes than tricycles did Jacob see?

Objects in the Store



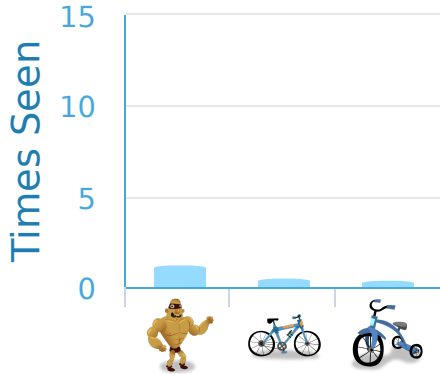
more

Show your work

#5

While at the store Noah made a bar graph of all the things that he'd seen. How many more action figures than bicycles did Noah see?

Objects in the Store



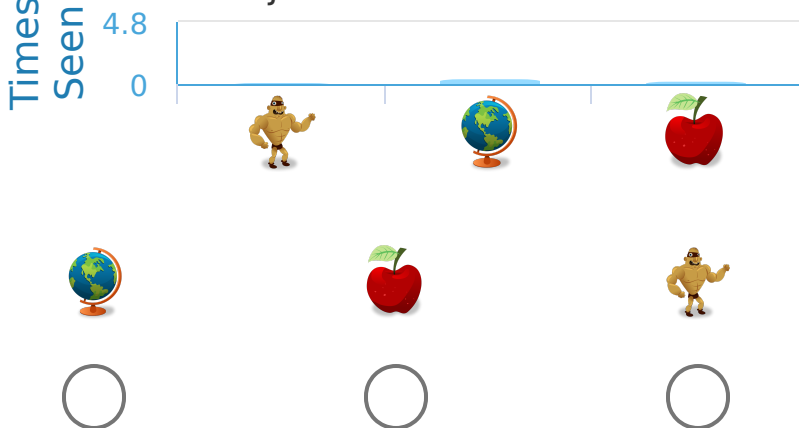
more

Show your work

#6

While at the store Benjamin made a bar graph of all the things that he'd seen. Which things did Benjamin see most?


Objects in the Store



Show your work

#7

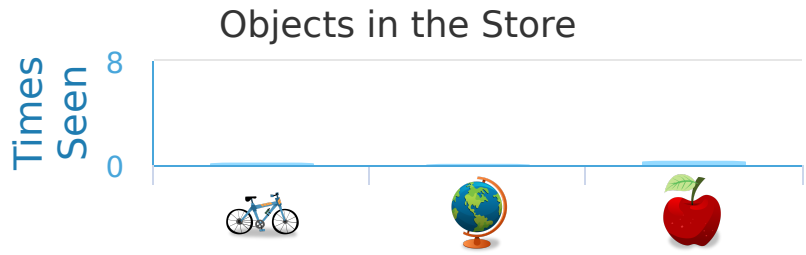
While at the store Makayla made a bar graph of all the things that she'd seen. How many more apples than globes did Makayla see?



Show your work

#8

While at the store Brayden made a bar graph of all the things that he'd seen. How many more bicycles than globes did Brayden see?




- 4 more
- 2 more
- 1 more
- 5 more

Show your work

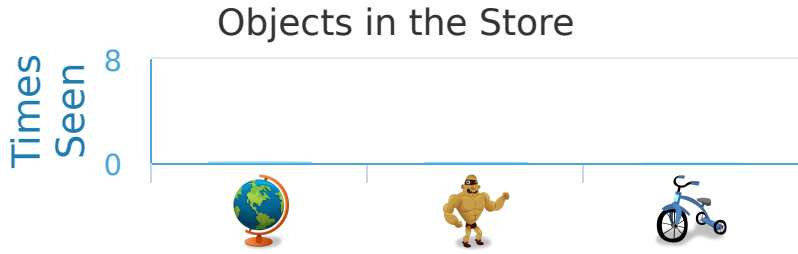
#9

While at the store Landon made a bar graph of all the things that he'd seen. How many more bicycles than apples did Landon see?



Show your work

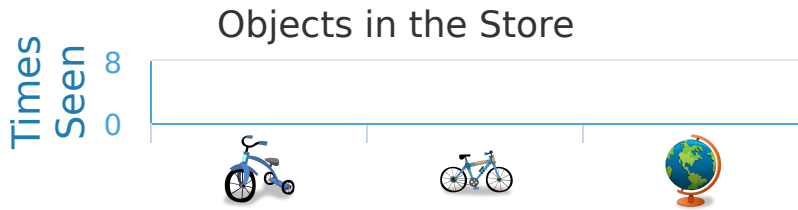
#10 While at the store Sydney made a bar graph of all the things that she'd seen. How many more globes than action figures did Sydney see?






- 2 more
- 5 more
- 1 more
- 3 more

Show your work

#11 While at the store Kevin made a bar graph of all the things that he'd seen. Which things did Kevin see most?



- 
- 
- 

Show your work

#12 While at the store Makayla made a bar graph of all the things that she'd seen. How many more apples than globes did Makayla see?



Show your work

Question	Answer
#1	choice 3
#2	choice 1
#3	9
#4	2
#5	6
#6	choice 1
#7	2
#8	choice 2
#9	3
#10	choice 1
#11	choice 1
#12	2