


#1

How many edges does this object have?




- 12
- 9
- 7
- 11

Show your work

#2

How many edges does this object have?




- 12
- 9
- 8
- 10

Show your work

#3

How many edges does this object have?




- 12
- 16
- 15
- 13

Show your work

#4

How many edges does this object have?



- 11
- 8
- 7
- 10

Show your work

#5

How many edges does this object have?



- 9
- 8
- 5
- 6

Show your work

#6

How many edges does this object have?




- 16
- 15
- 10
- 12

Show your work

#7

How many edges does this object have?



11

12

8

13

Show your work

#8

How many edges does this object have?



4

6


3

7

Show your work

#9

How many edges does this object have?



7

8


10

9

Show your work

#10

How many edges does this object have?



- 9
- 8
- 7
- 5

Show your work

#11

How many edges does this object have?




- 7
- 6
- 8
- 3

Show your work

#12

How many edges does this object have?



- 9
- 12
- 14
- 13

Show your work

Question	Answer
#1	9
#2	12
#3	12
#4	8
#5	6
#6	12
#7	12
#8	6
#9	9
#10	8
#11	6
#12	12