

#1

How many edges does this object have?




- 8
- 7
- 6
- 9

Show your work

#2

How many edges does this object have?



- 13
- 12
- 9
- 16

Show your work

#3

How many edges does this object have?




- 10
- 13
- 12
- 15

Show your work

#4

How many edges does this object have?



8

9

12

16

Show your work

#5

How many edges does this object have?



9

6


4

5

Show your work

#6

How many edges does this object have?



12

10


11

16

Show your work

#7

How many edges does this object have?



8

10


13

12

Show your work

#8

How many edges does this object have?



10

9


8

12

Show your work

#9

How many edges does this object have?



11

10


8

12

Show your work

#10

How many edges does this object have?




- 5
- 10
- 7
- 8

Show your work

#11

How many edges does this object have?



- 12
- 16
- 14
- 11

Show your work

#12

How many edges does this object have?



- 8
- 12
- 10
- 16

Show your work

Question	Answer
#1	6
#2	12
#3	12
#4	12
#5	6
#6	12
#7	12
#8	12
#9	12
#10	8
#11	12
#12	12