




#1

How many vertices does this object have?

 11 8 5 10

Show your work

#2


How many vertices does this object have?

 5 6 4 1

Show your work

#3

How many vertices does this object have?


 8 6 4 5

Show your work



#4

How many vertices does this object have?



- 4
- 3
- 7
- 5

Show your work

#5

How many vertices does this object have?




- 6
- 5
- 3
- 4

Show your work

#6

How many vertices does this object have?




- 6
- 5
- 8
- 7

Show your work



#7


How many vertices does this object have?

 3 5 4 7

Show your work

#8

How many vertices does this object have?

 9 6 8 3

Show your work

#9

How many vertices does this object have?

 3 8 7 5

Show your work



#10

How many vertices does this object have?



3

6


7

5

Show your work

#11

How many vertices does this object have?



9

6

3

8

Show your work

#12

How many vertices does this object have?



6

4

3

7

Show your work

Question	Answer
#1	8
#2	4
#3	5
#4	5
#5	5
#6	8
#7	5
#8	6
#9	5
#10	5
#11	6
#12	4