




#1

How many vertices does this object have?



6

3

9

5

Show your work

#2

How many vertices does this object have?



8

5

4

7

Show your work

#3

How many vertices does this object have?



5

4

8

3

Show your work



#4

How many vertices does this object have?

 4 7 3 5

Show your work

#5

How many vertices does this object have?

 2 4 1 5

Show your work

#6

How many vertices does this object have?


 2 6 4 3

Show your work



#7

How many vertices does this object have?



4

6


8

7

Show your work

#8

How many vertices does this object have?



7

6


5

3

Show your work

#9

How many vertices does this object have?



6

8

5

10

Show your work



#10

How many vertices does this object have?

 5 4 2 3

Show your work

#11

How many vertices does this object have?

 5 8 2 7

Show your work

#12

How many vertices does this object have?

 3 5 4 7

Show your work

Question	Answer
#1	6
#2	5
#3	5
#4	5
#5	4
#6	4
#7	6
#8	6
#9	8
#10	4
#11	5
#12	5