


#1

How many faces does this object have?




- 4
- 3
- 6
- 5

Show your work

#2

How many faces does this object have?



- 4
- 7
- 9
- 6

Show your work

#3

How many faces does this object have?




- 1
- 4
- 7
- 6

Show your work

#4

How many faces does this object have?




- 5
- 8
- 2
- 6

Show your work

#5

How many faces does this object have?




- 7
- 4
- 6
- 3

Show your work

#6

How many faces does this object have?



- 4
- 5
- 6
- 3

Show your work

#7

How many faces does this object have?




- 4 3
 1 7

Show your work

#8

How many faces does this object have?




- 6 7
 9 4

Show your work

#9

How many faces does this object have?




- 4 5
 6 7

Show your work



#10

How many faces does this object have?

 8 4 3 6

Show your work

#11


How many faces does this object have?

 2 7 1 4

Show your work

#12

How many faces does this object have?

 3 4 8 5

Show your work

Question	Answer
#1	6
#2	6
#3	4
#4	5
#5	6
#6	6
#7	4
#8	6
#9	5
#10	6
#11	4
#12	5