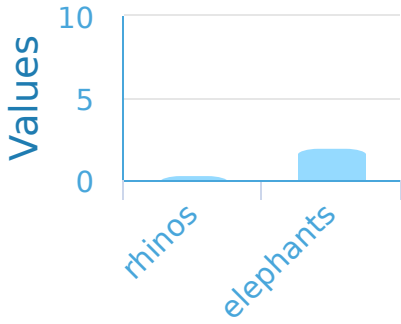
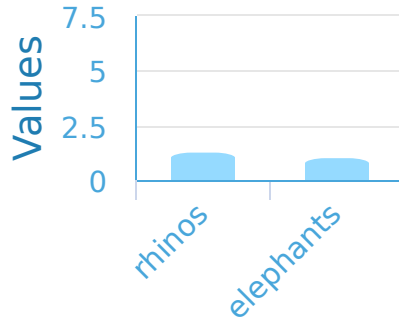


#1

At the zoo Isabella saw 1 rhino and 7 elephants. Which bar graph corresponds to what Isabella saw?

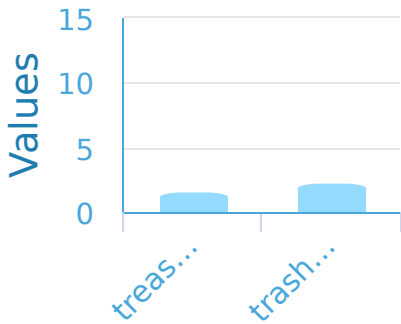


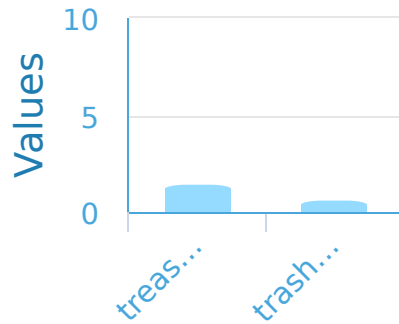


Show your work

#2

For a pirate school assignment Angela made a chart of the furniture in her room. There are 7 treasure chests and 10 trash cans. Which bar graph corresponds to Angela's furniture?

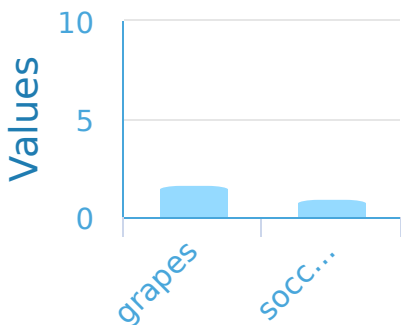


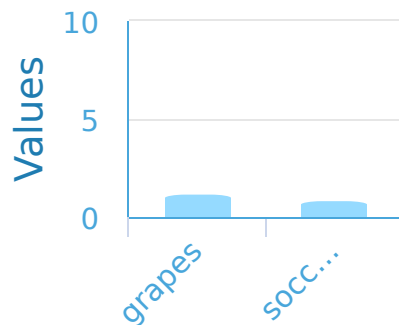


Show your work

#3

Brayden loves making graphs. At the sphere store he saw 9 grapes and 5 soccer balls. Which bar graph corresponds to what Brayden saw?

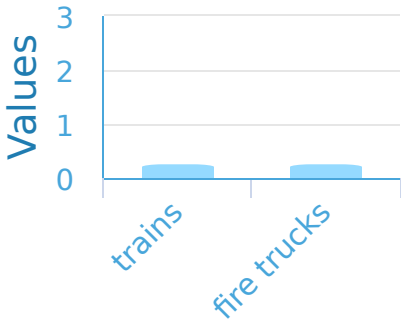


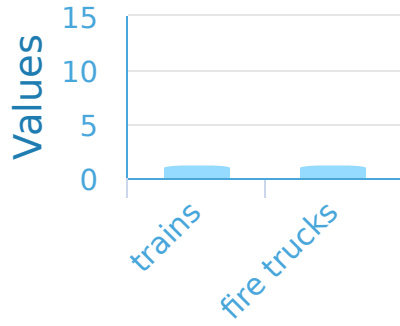


Show your work

#4

Kevin likes toy vehicles and made a chart of the ones he owns. There are 2 trains and 2 fire trucks. Which bar graph corresponds to the toys Kevin has?

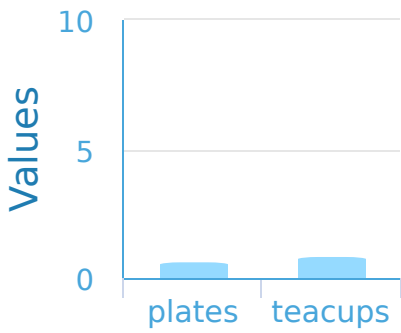


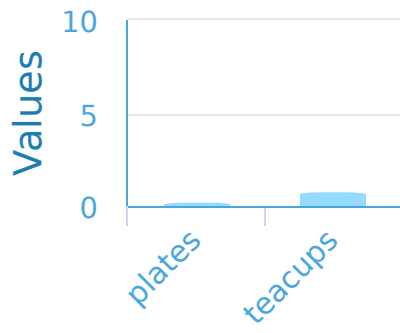


Show your work

#5

In Zachary's kitchen there are 6 plates and 8 teacups. Which bar graph corresponds to the contents of the kitchen?

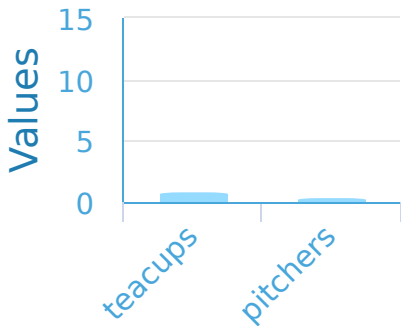


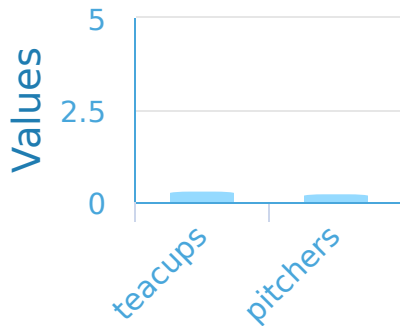


Show your work

#6

In Joseph's kitchen there are 10 teacups and 4 pitchers. Which bar graph corresponds to the contents of the kitchen?

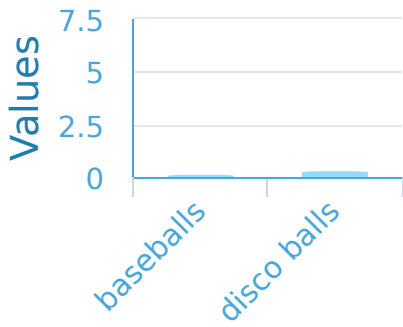


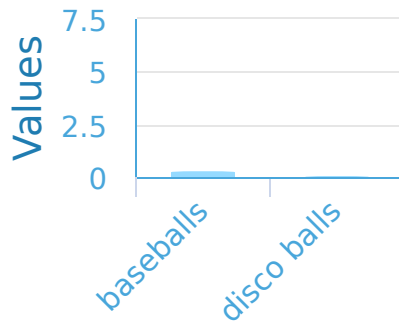


Show your work

#7

In the school gym Daniel saw 2 baseballs and 5 disco balls. Which bar graph corresponds to what Daniel saw?

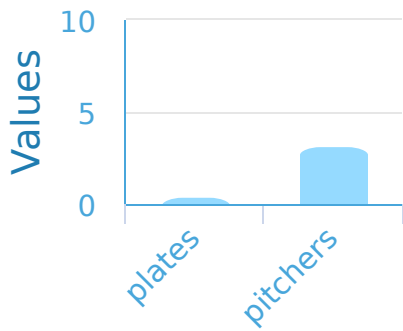


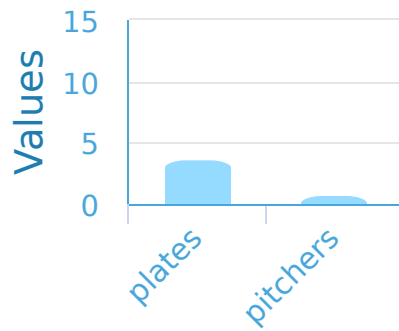


Show your work

#8

In Hailey's kitchen there is 1 plate and 8 pitchers. Which bar graph corresponds to the contents of the kitchen?

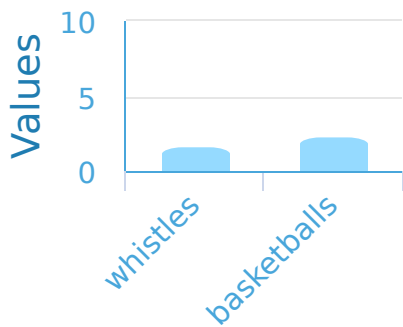


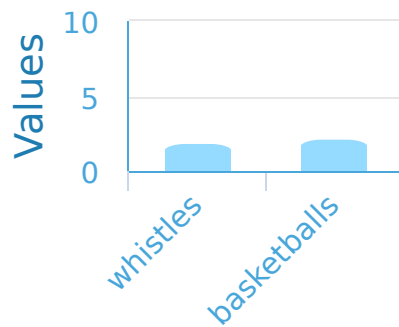


Show your work

#9

Joshua is doing inventory at his sporting goods store. He saw 6 whistles and 7 basketballs. Which bar graph corresponds to what Joshua saw?



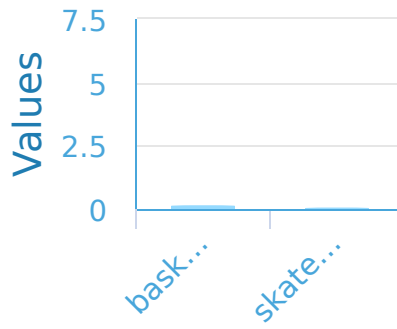
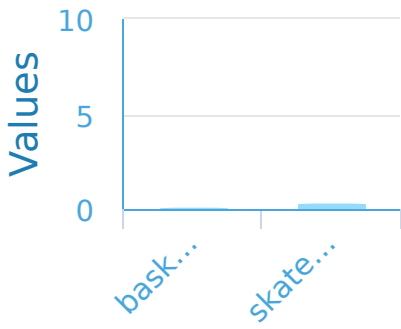


Show your work



#10

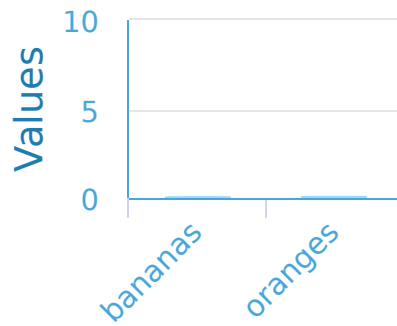
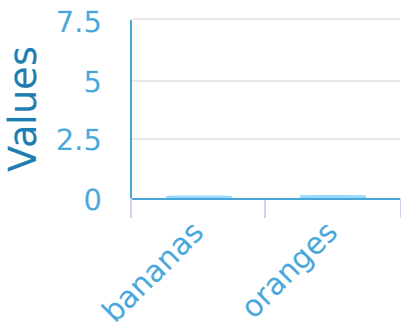
Ethan is doing inventory at his sporting goods store. He saw 5 basketballs and 2 skateboards. Which bar graph corresponds to what Ethan saw?



Show your work

#11

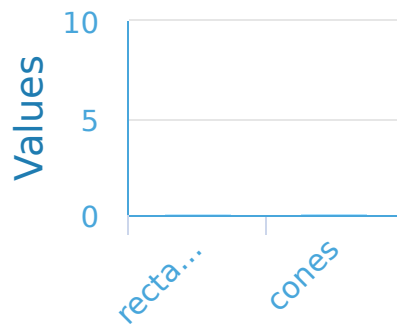
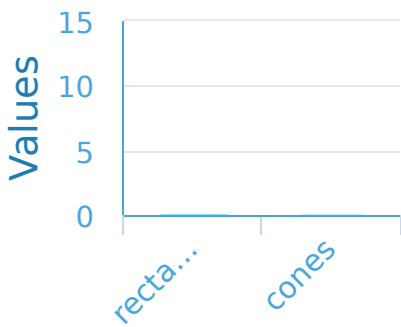
Alexander's mom gave him a chart of the fruits he needs to buy. The chart has 5 bananas and 6 oranges. Which bar graph corresponds to what Alexander needs to buy?



Show your work

#12

In a box of building blocks Gavin found 7 rectangular pyramids and 9 cones. Which bar graph corresponds to what Gavin saw?



Show your work

Question	Answer
#1	choice 1
#2	choice 1
#3	choice 1
#4	choice 1
#5	choice 1
#6	choice 1
#7	choice 1
#8	choice 1
#9	choice 2
#10	choice 2
#11	choice 1
#12	choice 2