

#1


Which of these clocks shows the time 5:15?



Show your work

#2


Which of these clocks shows the time 7:15?



Show your work

#3


Which of these clocks shows the time 9:30?



Show your work

#4


Which of these clocks shows the time 10:00?



Show your work

#5

Which of these clocks shows the time 11:00?



Show your work

#6


Which of these clocks shows the time 10:00?



Show your work

#7


Which of these clocks shows the time 10:00?



Show your work

#8


Which of these clocks shows the time 11:30?



Show your work

#9

Which of these clocks shows the time 5:30?



Show your work

#10


Which of these clocks shows the time 1:45?

1:45 7:30 7:15 11:00

Show your work

#11


Which of these clocks shows the time 9:45?



Show your work

#12

Which of these clocks shows the time 4:15?



Show your work

Question	Answer
#1	choice 1
#2	choice 4
#3	choice 4
#4	choice 4
#5	choice 1
#6	choice 2
#7	choice 1
#8	choice 4
#9	choice 2
#10	choice 1
#11	choice 4
#12	choice 3