

#1

Which of these clocks shows the time 12:00?

12:00

3:00

11:30

1:00

Show your work

#2

Which of these clocks shows the time 11:15?

4:15

3:45

7:00

11:15

Show your work

#3

Which of these clocks shows the time 9:45?

9:45

11:45

3:00

4:30

Show your work

#4


Which of these clocks shows the time 8:30?

4:00 8:30 11:00 7:30

Show your work

#5

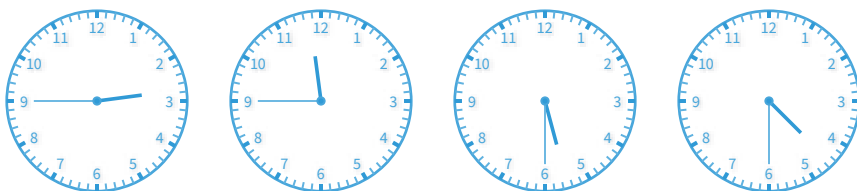
Which of these clocks shows the time 9:15?



Show your work

#6


Which of these clocks shows the time 5:30?



Show your work

#7

Which of these clocks shows the time 3:30?



Show your work

#8

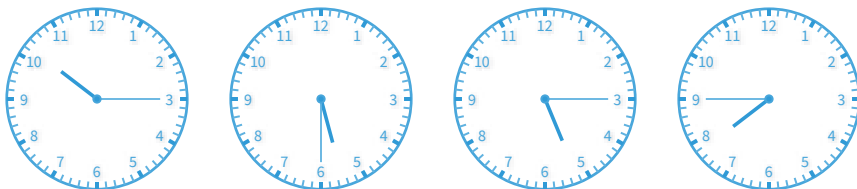
Which of these clocks shows the time 5:45?



Show your work

#9


Which of these clocks shows the time 5:30?



Show your work

#10

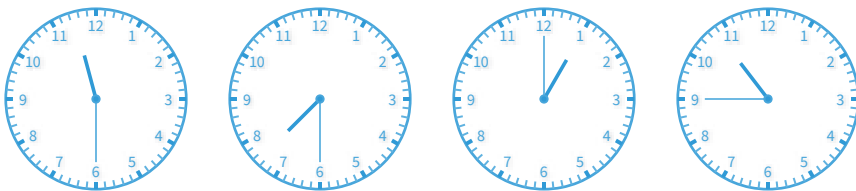
Which of these clocks shows the time 9:30?



Show your work

#11

Which of these clocks shows the time 10:45?



Show your work

#12

Which of these clocks shows the time 5:00?



Show your work

Question	Answer
#1	choice 1
#2	choice 4
#3	choice 1
#4	choice 2
#5	choice 1
#6	choice 3
#7	choice 2
#8	choice 3
#9	choice 2
#10	choice 4
#11	choice 4
#12	choice 4