


#1

How many edges does this object have?



- 12
- 10
- 8
- 9

Show your work

#2

How many faces does this object have?




- 6
- 4
- 7
- 1

Show your work

#3

How many vertices does this object have?




- 10
- 8
- 5
- 6

Show your work

#4

How many faces does this object have?




- 8
- 5
- 2
- 3

Show your work

#5

How many faces does this object have?



- 6
- 7
- 3
- 9

Show your work

#6

How many edges does this object have?




- 8
- 9
- 3
- 6

Show your work

#7

How many vertices does this object have?




- 7
- 5
- 6
- 8

Show your work

#8

How many faces does this object have?



- 2
- 5
- 4
- 3

Show your work

#9

How many edges does this object have?




- 7
- 5
- 3
- 6

Show your work

#10

How many faces does this object have?



- 4
- 6
- 5
- 7

Show your work

#11

How many vertices does this object have?




- 1
- 2
- 4
- 3

Show your work

#12

How many vertices does this object have?



- 7
- 8
- 5
- 2

Show your work

Question	Answer
#1	12
#2	4
#3	8
#4	5
#5	6
#6	6
#7	8
#8	5
#9	6
#10	5
#11	4
#12	5