

#1

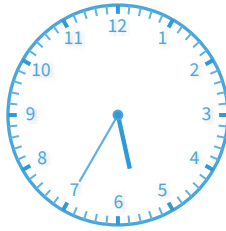
The clocks show three things Alyssa did Thursday evening. Which did Alyssa do last?



soccer



homework



eat

- homework
 soccer
 eat

Show your work

#2

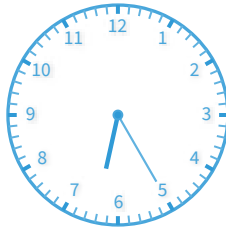
The clocks show three things Dylan did Wednesday evening. Which did Dylan do first?



play games



violin



walk dog

- walk dog
 violin
 play games

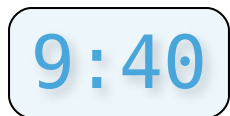
Show your work

#3

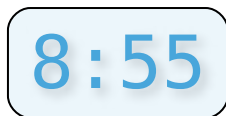
The clocks show three things Kevin did Thursday evening. Which did Kevin do last?



soccer



homework



eat

- eat
 homework
 soccer

Show your work

#4

The clocks show three things Maya did Wednesday evening. Which did Maya do last?

6:10

play games

9:00

violin

8:20

walk dog

- walk dog
 play games
 violin

Show your work

#5

The clocks show three things Alyssa did Monday evening. Which did Alyssa do last?

8:55

phone
call

6:25

fed fish

8:40

play

- phone call
 play
 fed fish

Show your work

#6

The clocks show three things Diana did Tuesday evening. Which did Diana do last?

8:50

math

8:35

science

5:00

history

- math
 history
 science

Show your work

#7


The clocks show three things Jackson did Tuesday evening. Which did Jackson do first?



math



science



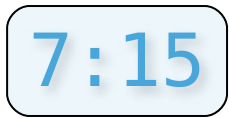
history

- science
 math
 history

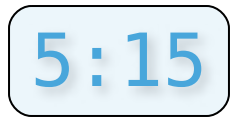
Show your work

#8

The clocks show three things Kaylee did Thursday evening. Which did Kaylee do first?



homework



read



eat

- homework
 read
 eat

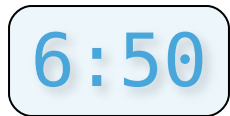
Show your work

#9

The clocks show three things Noah did Thursday evening. Which did Noah do last?



soccer



homework



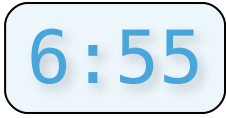
eat

- homework
 soccer
 eat

Show your work

#10

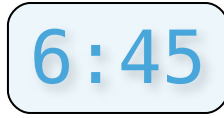
The clocks show three things Landon did Thursday evening. Which did Landon do last?



soccer



homework



eat

- eat
 homework
 soccer

Show your work

#11

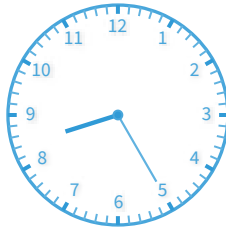
The clocks show three things Logan did Monday evening. Which did Logan do first?



phone call



fed fish



play

- play
 phone call
 fed fish

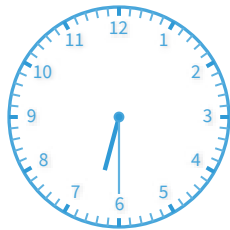
Show your work

#12

The clocks show three things Evan did Tuesday evening. Which did Evan do last?



math



science



history

- history
 science
 math

Show your work

Question	Answer
#1	choice 2
#2	choice 1
#3	choice 2
#4	choice 3
#5	choice 1
#6	choice 1
#7	choice 3
#8	choice 2
#9	choice 2
#10	choice 3
#11	choice 3
#12	choice 1