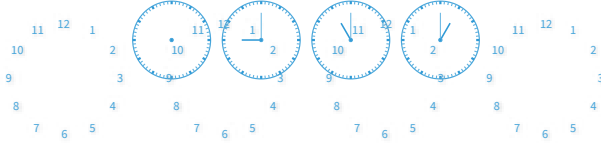


#1

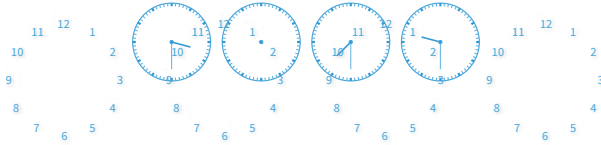
Choose the missing time.



Show your work

#2

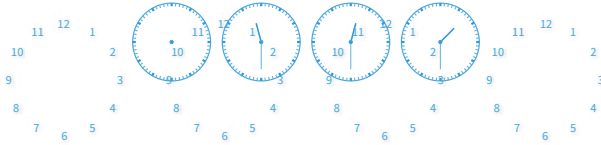
Choose the missing time.



Show your work

#3

Choose the missing time.



Show your work

#4

Choose the missing time.

?:?:??   4:30   6:30 8:30

2:30

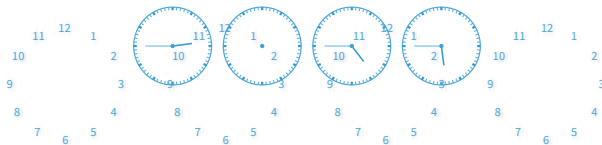
12:15



Show your work

#5

Choose the missing time.



Show your work

#6

Choose the missing time.

9:45   :   11:45 12:45

9:30

10:45



Show your work

#7

Choose the missing time.

2:30     4:30 5:30

11:15

3:30



Show your work

#8

Choose the missing time.

10:00     12:00 ??:??

1:00

1:30



Show your work

#9

Choose the missing time.

6:30     8:30 ??:?? 12:30

7:15

10:30



Show your work

#10

Choose the missing time.

??:?? 8:45 10:45 12:45

11:30

6:45



Show your work

#11

Choose the missing time.

8:30 ??:?? 12:30 2:30

8:15

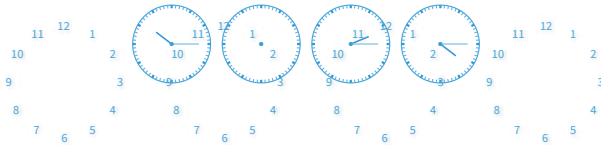
10:30



Show your work

#12

Choose the missing time.



Show your work

Question	Answer
#1	choice 1
#2	choice 1
#3	choice 1
#4	choice 1
#5	choice 2
#6	choice 2
#7	choice 2
#8	choice 1
#9	choice 2
#10	choice 2
#11	choice 2
#12	choice 1