

#1

Choose the missing time.

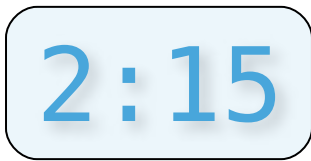


Show your work

#2

Choose the missing time.

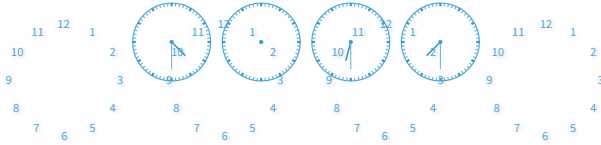
6:00 8:00 12:00



Show your work

#3


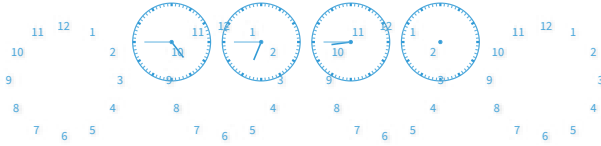
Choose the missing time.



Show your work

#4

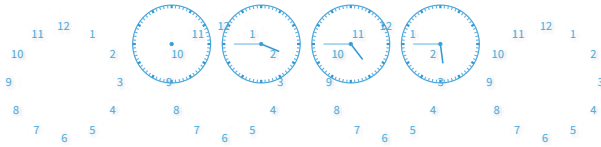
Choose the missing time.



Show your work

#5

Choose the missing time.

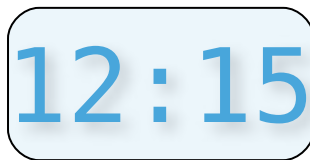
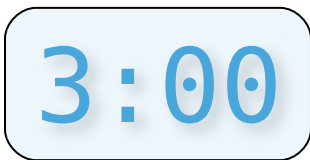


Show your work

#6

Choose the missing time.


??:??
 1:15 2:15 3:15



Show your work

#7

Choose the missing time.



Show your work

#8

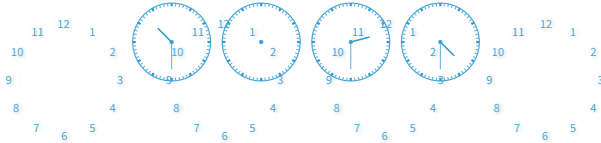
Choose the missing time.



Show your work

#9

Choose the missing time.



Show your work

#10

Choose the missing time.

10:30 2:30 4:30

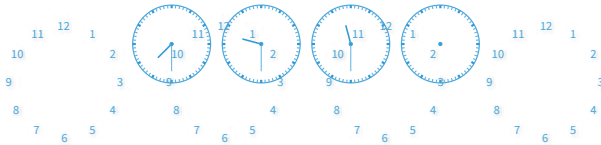
9:45

12:30

Show your work

#11

Choose the missing time.



Show your work

#12

Choose the missing time.

8:30 12:30 2:30

8:15

10:30

Show your work

Question	Answer
#1	choice 2
#2	choice 2
#3	choice 1
#4	choice 1
#5	choice 2
#6	choice 2
#7	choice 2
#8	choice 2
#9	choice 1
#10	choice 2
#11	choice 1
#12	choice 2