




#1 Look at these coins. Which group shows the same amount?





Show your work

#2 Look at these coins. Which group shows the same amount?





Show your work

#3 Look at these coins. Which group shows the same amount?




Show your work

#4 Look at these coins. Which group shows the same amount?





Show your work

#5 Look at these coins. Which group shows the same amount?





Show your work

#6 Look at these coins. Which group shows the same amount?





Show your work

#7 Look at these coins. Which group shows the same amount?





Show your work

#8 Look at these coins. Which group shows the same amount?




Show your work

#9 Look at these coins. Which group shows the same amount?





Show your work

#10 Look at these coins. Which group shows the same amount?





Show your work

#11 Look at these coins. Which group shows the same amount?



Show your work

#12 Look at these coins. Which group shows the same amount?



Show your work

Question	Answer
#1	choice 2
#2	choice 1
#3	choice 1
#4	choice 2
#5	choice 1
#6	choice 2
#7	choice 2
#8	choice 1
#9	choice 2
#10	choice 1
#11	choice 1
#12	choice 2