



#1



Complete the money equation below.

10  = 

Show your work

#2



Complete the money equation below.

4  = 

Show your work

#3



Complete the money equation below.

10  = 

Show your work

#4

Complete the money equation below.

50  = 

Show your work

#5

Complete the money equation below.

 = 1 

Show your work

#6

Complete the money equation below.

 = 2 

Show your work

#7

Complete the money equation below.



Show your work

#8

Complete the money equation below.



Show your work

#9



Complete the money equation below.



Show your work

#10

Complete the money equation below.

10  = 

Show your work

#11



Complete the money equation below.

 = 1 

Show your work

#12

Complete the money equation below.

10  = 

Show your work

Question	Answer
#1	2
#2	1
#3	5
#4	1
#5	5
#6	4
#7	4
#8	8
#9	50
#10	1
#11	100
#12	2