



#1

Complete the money equation below.

10  = 

Show your work

#2

Complete the money equation below.

 = 2 

Show your work

#3

Complete the money equation below.

 = 1 

Show your work

#4



Complete the money equation below.

 = 1 

Show your work

#5



Complete the money equation below.

4  = 

Show your work

#6



Complete the money equation below.

10  = 

Show your work

#7



Complete the money equation below.

10  = 

Show your work

#8



Complete the money equation below.

8  = 

Show your work

#9


Complete the money equation below.

10  = 

Show your work

#10



Complete the money equation below.

 = 2 

Show your work

#11

Complete the money equation below.

2  = 

Show your work

#12

Complete the money equation below.

 = 1 

Show your work

Question	Answer
#1	4
#2	4
#3	5
#4	50
#5	1
#6	1
#7	2
#8	2
#9	2
#10	10
#11	1
#12	10