

#1 How do you make 93 cents using the fewest coins?

$$\begin{array}{ccccccc} \boxed{\phantom{00}} & \text{ONE DOLLAR} & + & \boxed{\phantom{00}} & \text{ONE DOLLAR} \\ & \text{QUARTER} & & & \text{QUARTER} \\ + & \boxed{\phantom{00}} & \text{ONE DOLLAR} & + & \boxed{\phantom{00}} & \text{ONE DOLLAR} \\ & \text{DIME} & & & \text{DIME} \end{array}$$

Show your work

#2 How do you make 25 cents using the fewest coins?

$$\begin{array}{ccccccc} \boxed{\phantom{00}} & \text{ONE DOLLAR} & + & \boxed{\phantom{00}} & \text{ONE DOLLAR} \\ & \text{QUARTER} & & & \text{QUARTER} \\ + & \boxed{\phantom{00}} & \text{ONE DOLLAR} & + & \boxed{\phantom{00}} & \text{ONE DOLLAR} \\ & \text{DIME} & & & \text{DIME} \end{array}$$





Show your work

#3 How do you make 96 cents using the fewest coins?

$$\begin{array}{ccccccc} \boxed{\phantom{00}} & \text{ONE DOLLAR} & + & \boxed{\phantom{00}} & \text{ONE DOLLAR} \\ & \text{QUARTER} & & & \text{QUARTER} \\ + & \boxed{\phantom{00}} & \text{ONE DOLLAR} & + & \boxed{\phantom{00}} & \text{ONE DOLLAR} \\ & \text{DIME} & & & \text{DIME} \end{array}$$





Show your work

#4 How do you make 77 cents using the fewest coins?

 +    
+   +  





Show your work

#5 How do you make 22 cents using the fewest coins?

 +    
+   +  





Show your work

#6 How do you make 63 cents using the fewest coins?

 +    
+   +  





Show your work

#7 How do you make 13 cents using the fewest coins?

 +    
+   +  





Show your work

#8 How do you make 22 cents using the fewest coins?

 +    
+   +  

Show your work





#9 How do you make 3 cents using the fewest coins?

 +    
+   +  

Show your work

#10





How do you make 48 cents using the fewest coins?

 +    
+   +  

Show your work

#11





How do you make 83 cents using the fewest coins?

 +    
+   +  

Show your work

#12

How do you make 79 cents using the fewest coins?

 +    
+   +  

Show your work

Question	Answer
#1	3, 1, 1, 3
#2	1, $^{(? : 0)} * \$$ , $^{(? : 0)} * \$$ , $^{(? : 0)} * \$$
#3	3, 2, $^{(? : 0)} * \$$ , 1
#4	3, $^{(? : 0)} * \$$ , $^{(? : 0)} * \$$ , 2
#5	$^{(? : 0)} * \$$ , 2, $^{(? : 0)} * \$$ , 2
#6	2, 1, $^{(? : 0)} * \$$ , 3
#7	$^{(? : 0)} * \$$ , 1, $^{(? : 0)} * \$$ , 3
#8	$^{(? : 0)} * \$$ , 2, $^{(? : 0)} * \$$ , 2
#9	$^{(? : 0)} * \$$ , $^{(? : 0)} * \$$ , $^{(? : 0)} * \$$ , 3
#10	1, 2, $^{(? : 0)} * \$$ , 3
#11	3, $^{(? : 0)} * \$$ , 1, 3
#12	3, $^{(? : 0)} * \$$ , $^{(? : 0)} * \$$ , 4