









#1 How do you make 93 cents using the fewest coins?

 + 
+  + 





Show your work

#2 How do you make 27 cents using the fewest coins?

 + 
+  + 





Show your work

#3 How do you make 9 cents using the fewest coins?

 + 
+  + 





Show your work

#4 How do you make 7 cents using the fewest coins?

 + 
+  + 





Show your work

#5 How do you make 96 cents using the fewest coins?

 + 
+  + 





Show your work

#6 How do you make 23 cents using the fewest coins?

 + 
+  + 





Show your work

#7 How do you make 18 cents using the fewest coins?

 + 
+  + 





Show your work

#8 How do you make 22 cents using the fewest coins?

 + 
+  + 

Show your work





#9 How do you make 13 cents using the fewest coins?

 + 
+  + 

Show your work

#10





How do you make 26 cents using the fewest coins?

 + 
+  + 

Show your work

#11





How do you make 22 cents using the fewest coins?

 + 
+  + 

Show your work

#12

How do you make 98 cents using the fewest coins?

 + 
+  + 

Show your work

Question	Answer
#1	3, 1, 1, 3
#2	1, ^*(?:0)*\$, ^*(?:0)*\$, 2
#3	^*(?:0)*\$, ^*(?:0)*\$, 1, 4
#4	^*(?:0)*\$, ^*(?:0)*\$, 1, 2
#5	3, 2, ^*(?:0)*\$, 1
#6	^*(?:0)*\$, 2, ^*(?:0)*\$, 3
#7	^*(?:0)*\$, 1, 1, 3
#8	^*(?:0)*\$, 2, ^*(?:0)*\$, 2
#9	^*(?:0)*\$, 1, ^*(?:0)*\$, 3
#10	1, ^*(?:0)*\$, ^*(?:0)*\$, 1
#11	^*(?:0)*\$, 2, ^*(?:0)*\$, 2
#12	3, 2, ^*(?:0)*\$, 3