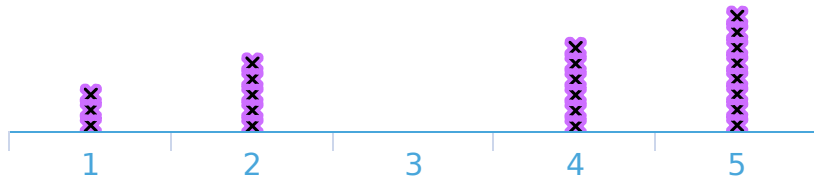


#1

Darren is a teacher and records the number of days that each of his students are absent. How many students are in the class?

Days Absent



- 18
- 25
- 26
- 22

Show your work

#2

Luke sells tickets at an amusement park and records the number that each person buys. How many people bought tickets?

Tickets Purchased



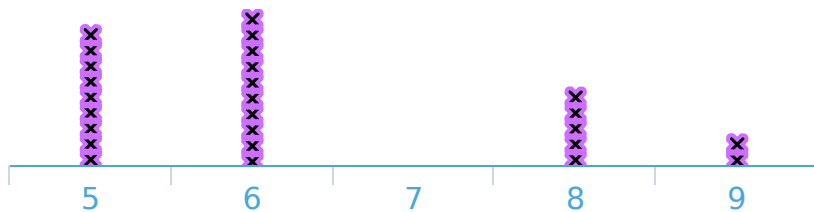
person(s)

Show your work

#3

Andrew owns a store and records the number of items each customer purchased. How many customers made a purchase?

Customer Purchases

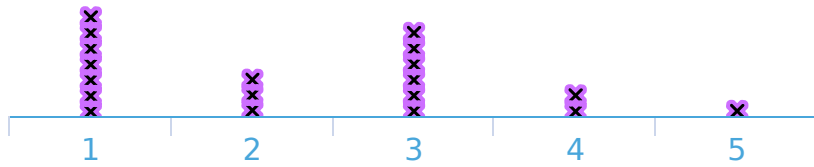


- 20
- 32
- 26
- 23

Show your work

#4 William owns a store and records the number of items each customer purchased. How many items did the greatest number of customers purchase?

Customer Purchases

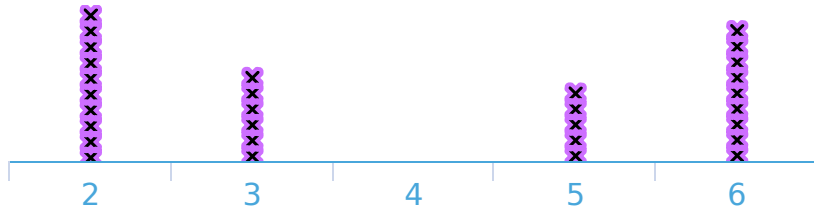


- 0
- 1
- 4
- 3

Show your work

#5 Kayla is recording how many solar panels are on each house in her neighbourhood. How many solar panels were on the greatest number of houses?

Solar Panels per House



- 5
- 3
- 0
- 2

Show your work

#6 Coach Tyler records the number of chin-ups done by each student. How many students did chin-ups?

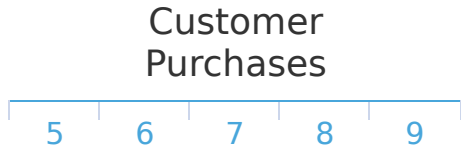
Chin-Ups per Student



student(s)

Show your work

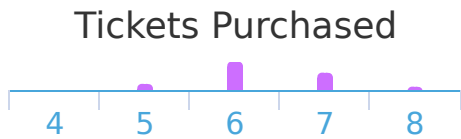
#7 Angela owns a store and records the number of items each customer purchased. How many items did the greatest number of customers purchase?



Purchases:

Show your work

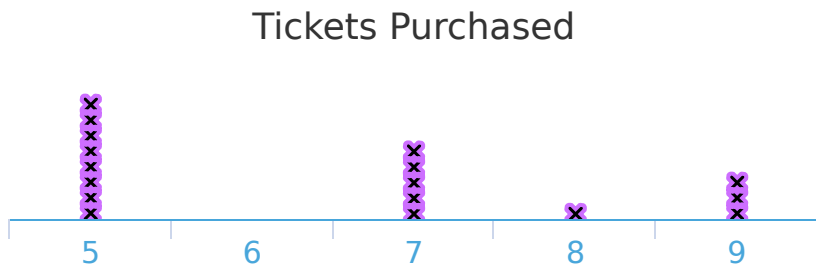
#8 Hannah sells tickets at an amusement park and records the number that each person buys. How many people bought tickets?



person(s)

Show your work

#9 Nick sells tickets at an amusement park and records the number that each person buys. How many tickets did the least number of people buy?



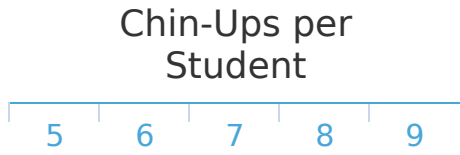
- | | |
|-------------------------|-------------------------|
| <input type="radio"/> 9 | <input type="radio"/> 3 |
| <input type="radio"/> 6 | <input type="radio"/> 5 |

Show your work



#10

Coach Nathan records the number of chin-ups done by each student. How many chin-ups did the greatest number of students get?




Chin-Ups:

Show your work

#11

Coach Owen records the long jump distances for each student. How many students did the long jump?

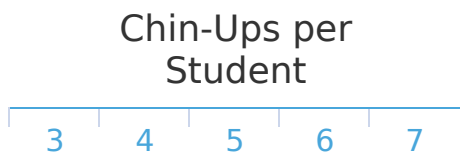


student(s)

Show your work

#12

Coach Alexa records the number of chin-ups done by each student. How many chin-ups did the greatest number of students get?



Chin-Ups:

Show your work

Question	Answer
#1	22
#2	21
#3	26
#4	1
#5	2
#6	26
#7	9
#8	19
#9	6
#10	6
#11	27
#12	7