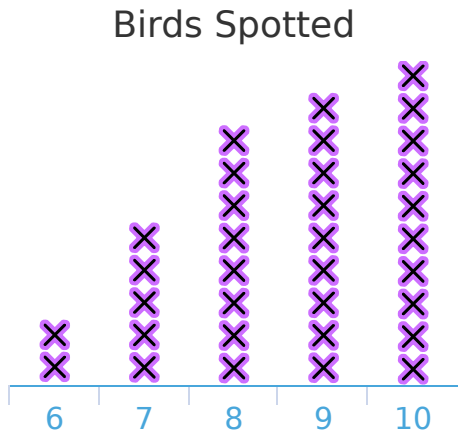


#1 Emma takes people on bird watching tours. She records the number of birds that each person sees. How many birds did the least number of people see?



Birds:

Show your work


#2 Dahlia serves sushi at a party and records how many pieces each person eats. How many people ate sushi?



person(s)

Show your work

#3 Coach Jayden records the long jump distances for each student. What distance did the lowest number of students get?

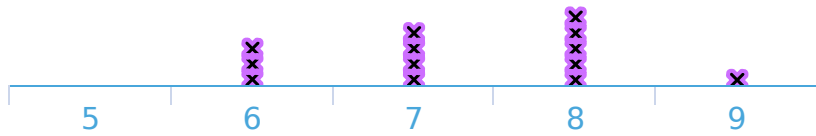


Distance:

Show your work

#4 Chloe is studying bees. She records how many flowers each bee visits before returning to the hive. How many flowers did the greatest number of bees visit?

Flowers Visited



- 9
- 10
- 5
- 8

Show your work

#5 Joseph owns a store and records the number of items each customer purchased. How many customers made a purchase?

Customer Purchases

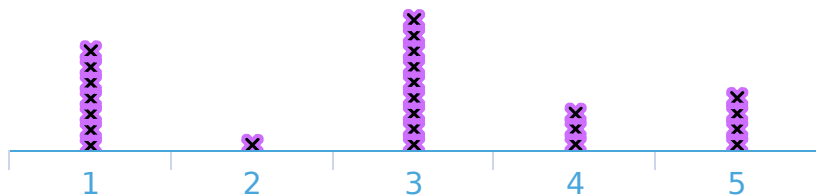


customer(s)

Show your work

#6 Brayden is a teacher and records the number of days that each of his students are absent. How many days did the least number of students miss?

Days Absent



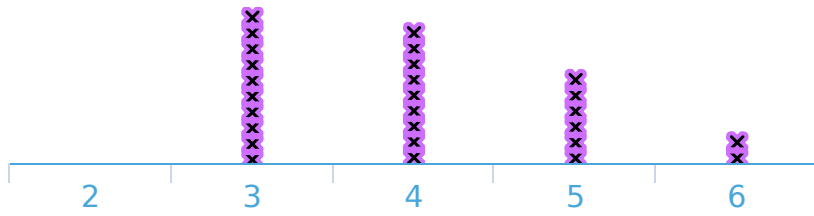
- 0
- 2
- 1
- 4

Show your work

#7

Coach Brayden records the long jump distances for each student.  
What distance did the greatest number of students get?

Long Jump Distances (ft)



- 6
- 0
- 5
- 3

Show your work

#8

Anthony owns a store and records the number of items each customer purchased. How many items did the greatest number of customers purchase?

Customer Purchases



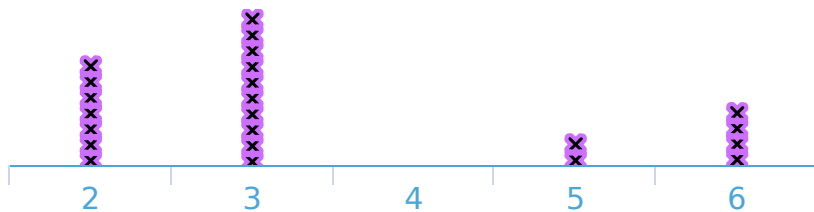
Purchases:

Show your work

#9

Kevin takes people on bird watching tours. He records the number of birds that each person sees. How many people went on the bird watching tour?

Birds Spotted

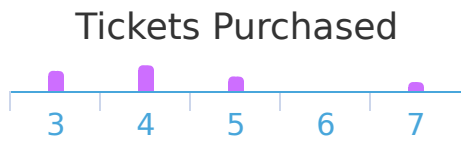


- 26
- 17
- 30
- 23

Show your work

#10

Sydney sells tickets at an amusement park and records the number that each person buys. How many tickets did the least number of people buy?

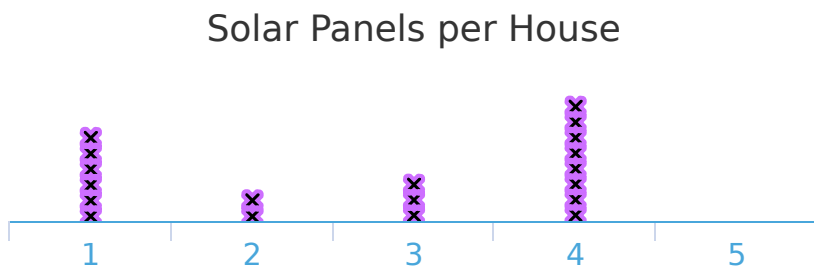


Tickets:

Show your work

#11

Alexa is recording how many solar panels are on each house in her neighbourhood. How many solar panels were on the least number of houses?

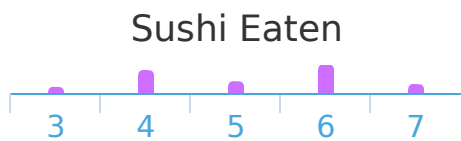


- |                         |                         |
|-------------------------|-------------------------|
| <input type="radio"/> 3 | <input type="radio"/> 4 |
| <input type="radio"/> 7 | <input type="radio"/> 5 |

Show your work

#12

Brianna serves sushi at a party and records how many pieces each person eats. How many people ate sushi?



person(s)

Show your work

Question	Answer
#1	6
#2	34
#3	4
#4	8
#5	22
#6	2
#7	3
#8	7
#9	23
#10	6
#11	5
#12	27