




#1

What is the area of this shape? Every square represents one unit square.

 12 10 7 9

Show your work

#2


What is the area of this shape? Every square represents one unit square.

 unit squares

Show your work

#3

What is the area of this shape? Every square represents one unit square.

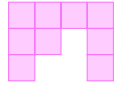
 unit squares

Show your work



#4

What is the area of this shape? Every square represents one unit square.




unit squares

Show your work

#5

What is the area of this shape? Every square represents one unit square.



- 21 14
 20 24

Show your work

#6

What is the area of this shape? Every square represents one unit square.




unit squares

Show your work



#7

What is the area of this shape? Every square represents one unit square.

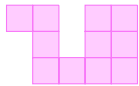


unit squares

Show your work

#8

What is the area of this shape? Every square represents one unit square.



unit squares

Show your work

#9

What is the area of this shape? Every square represents one unit square.



unit squares

Show your work



#10

What is the area of this shape? Every square represents one unit square.



unit squares

Show your work

#11

What is the area of this shape? Every square represents one unit square.




unit squares

Show your work

#12

What is the area of this shape? Every square represents one unit square.



19

18

15

17

Show your work

Question	Answer
#1	9
#2	12
#3	10
#4	9
#5	20
#6	9
#7	12
#8	11
#9	8
#10	9
#11	12
#12	15