




#1

What is the area of this shape? Every square represents one unit square.

 12 10 7 9

Show your work

#2


What is the area of this shape? Every square represents one unit square.

 unit squares

Show your work

#3

What is the area of this shape? Every square represents one unit square.


 12 20 13 15

Show your work



#4


What is the area of this shape? Every square represents one unit square.

 11 7 6 8

Show your work

#5

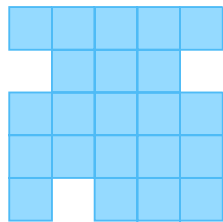
What is the area of this shape? Every square represents one unit square.

 8 9 5 7

Show your work

#6

What is the area of this shape? Every square represents one unit square.

 25 23 22 28

Show your work



#7

What is the area of this shape? Every square represents one unit square.



unit squares

Show your work

#8

What is the area of this shape? Every square represents one unit square.

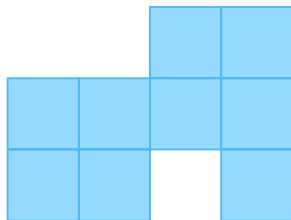


unit squares

Show your work

#9

What is the area of this shape? Every square represents one unit square.



8

9

12

11

Show your work



#10

What is the area of this shape? Every square represents one unit square.




unit squares

Show your work

#11

What is the area of this shape? Every square represents one unit square.



- 12                       9  
 11                       7

Show your work

#12

What is the area of this shape? Every square represents one unit square.



unit squares

Show your work

Question	Answer
#1	9
#2	12
#3	15
#4	8
#5	8
#6	22
#7	7
#8	5
#9	9
#10	11
#11	11
#12	8